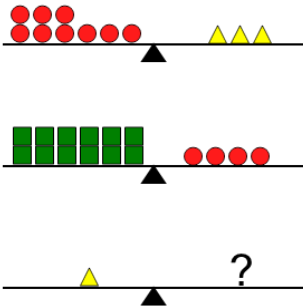


Balance Shapes - 3 Beams, Simple Substitution

1

Which shapes will balance the bottom scale?



A



B



C

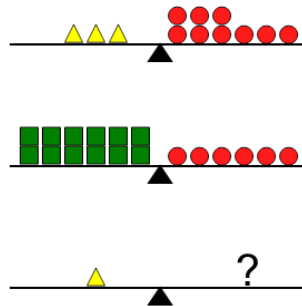


D




2


Which shapes will balance the bottom scale?



A



B



C



D

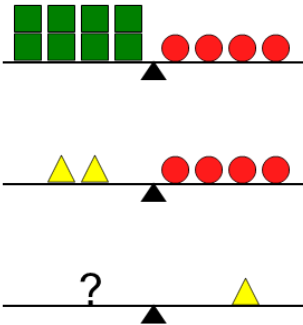


E



3


Which shapes will balance the bottom scale?



A



B



C



D

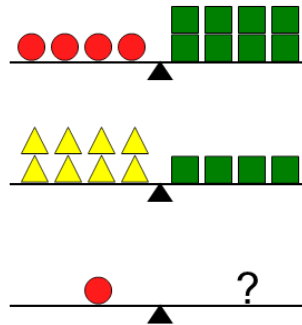


E




4


Which shapes will balance the bottom scale?



A



B



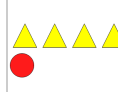
C



D

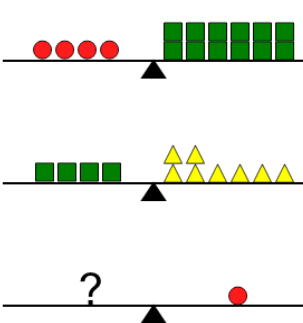


E

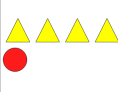


5


Which shapes will balance the bottom scale?



A




B




C



D

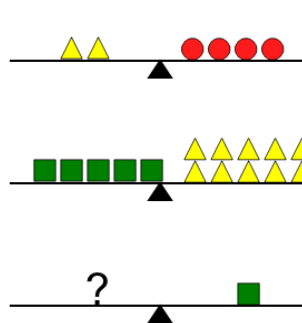


E




6

Which shapes will balance the bottom scale?



A



B




C



D

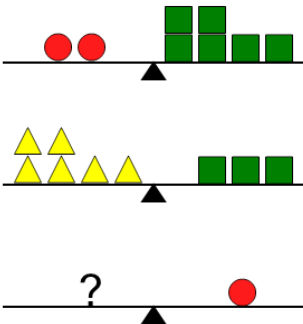


E




7

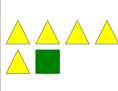
Which shapes will balance the bottom scale?




A




B




C



D

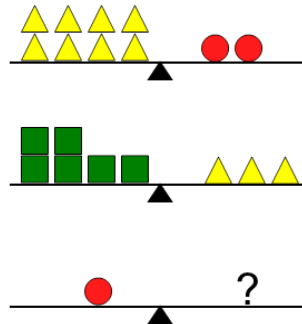


E




8


Which shapes will balance the bottom scale?




A



B



C



D



E

