


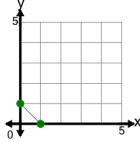
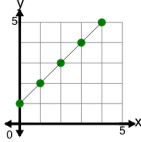


## Algebra - Find Equivalent - Function to Graph

**1**

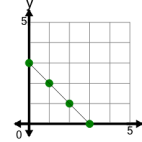
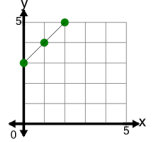
What graphed line shows this equation?

$$y = -1x + 1$$

**A****B****2**

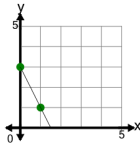
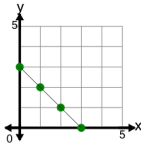
What graphed line shows this equation?

$$y = 1x + 3$$

**A****B****3**

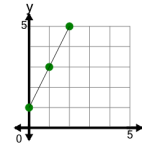
What graphed line shows this equation?

$$y = -2x + 3$$

**A****B****4**

What graphed line shows this equation?

$$y = 2x + 1$$

**A****B**