




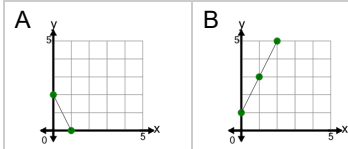
Algebra - Find Equivalent - X,Y Chart to Graph



1

| X | Y |
|---|---|
| 0 | 1 |
| 1 | 3 |
| 2 | 5 |

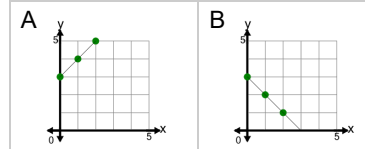
What graph matches this chart of X, Y values?



2

| X | Y |
|---|---|
| 0 | 3 |
| 1 | 4 |
| 2 | 5 |

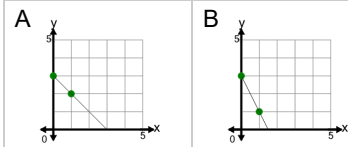
What graph matches this chart of X, Y values?



3

| X | Y |
|---|---|
| 0 | 3 |
| 1 | 1 |

What graph matches this chart of X, Y values?



4

| X | Y |
|---|---|
| 0 | 3 |
| 1 | 2 |
| 2 | 1 |
| 3 | 0 |

What graph matches this chart of X, Y values?

