
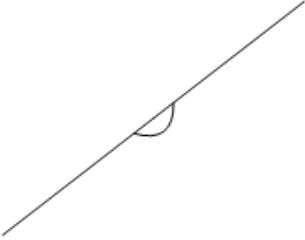
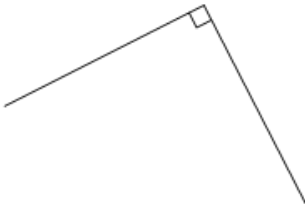
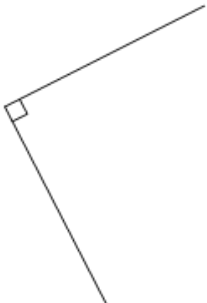
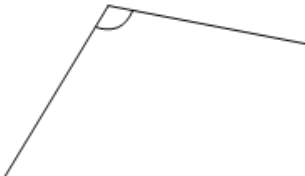
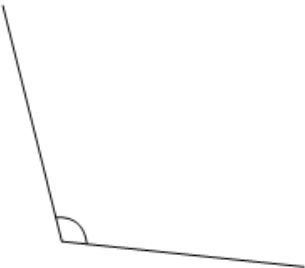

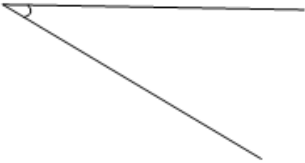





Angles - Acute, Obtuse, Right or Straight



<p>1 Name the type of angle</p> 	<p>A right</p>	<p>B acute</p>	<p>2 Name the type of angle</p> 	<p>A obtuse</p>	<p>B right</p>
	<p>C straight</p>	<p>D obtuse</p>		<p>C straight</p>	<p>D acute</p>
<p>3 Name the type of angle</p> 	<p>A right</p>	<p>B straight</p>	<p>4 Name the type of angle</p> 	<p>A acute</p>	<p>B straight</p>
	<p>C acute</p>	<p>D obtuse</p>		<p>C right</p>	<p>D obtuse</p>
<p>5 Name the type of angle</p> 	<p>A straight</p>	<p>B acute</p>	<p>6 Name the type of angle</p> 	<p>A obtuse</p>	<p>B right</p>
	<p>C obtuse</p>	<p>D right</p>		<p>C straight</p>	<p>D acute</p>
<p>7 Name the type of angle</p> 	<p>A acute</p>	<p>B straight</p>	<p>8 Name the type of angle</p> 	<p>A obtuse</p>	<p>B right</p>
	<p>C obtuse</p>	<p>D right</p>		<p>C straight</p>	<p>D acute</p>