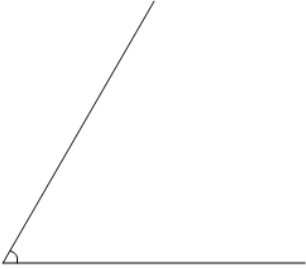
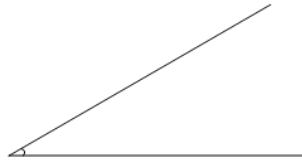
**1**

Is the displayed angle  
equal to  $45^\circ$ ?

A

It is  $45^\circ$ 

B


It is not  $45^\circ$ **2**

Is the displayed angle  
equal to  $30^\circ$ ?

A

It is not  $30^\circ$ 

B

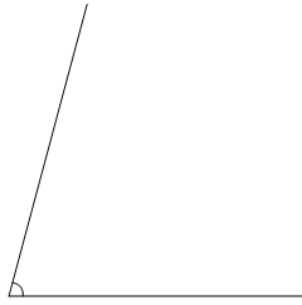
It is  $30^\circ$ **3**

Is the displayed angle  
equal to  $90^\circ$ ?

A

It is not  $90^\circ$ 

B

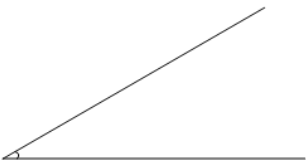
It is  $90^\circ$ **4**

Is the displayed angle  
equal to  $75^\circ$ ?

A

It is not  $75^\circ$ 

B

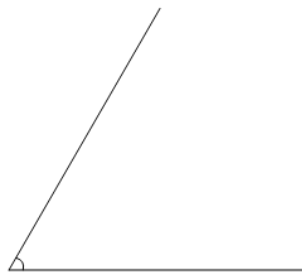
It is  $75^\circ$ **5**

Is the displayed angle  
equal to  $30^\circ$ ?

A

It is not  $30^\circ$ 

B


It is  $30^\circ$ **6**

Is the displayed angle  
equal to  $60^\circ$ ?

A

It is  $60^\circ$ 

B

It is not  $60^\circ$ **7**

Is the displayed angle  
equal to  $60^\circ$ ?

A

It is not  $60^\circ$ 

B

It is  $60^\circ$ **8**

Is the displayed angle  
equal to  $45^\circ$ ?

A

It is  $45^\circ$ 

B

It is not  $45^\circ$