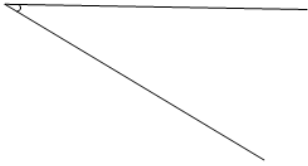
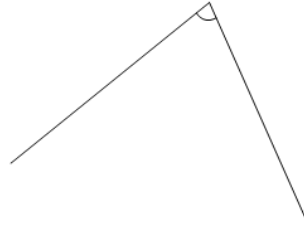
**1**

Is the displayed angle
equal to 30° ?

A

It is not 30°

B

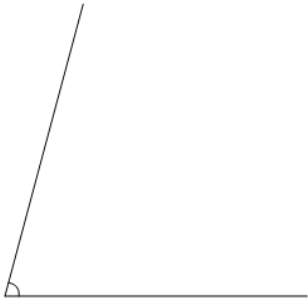
It is 30° **2**

Is the displayed angle
equal to 75° ?

A

It is 75°

B

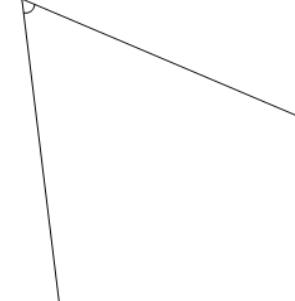
It is not 75° **3**

Is the displayed angle
equal to 75° ?

A

It is 75°

B

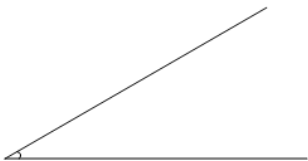
It is not 75° **4**

Is the displayed angle
equal to 60° ?

A

It is 60°

B

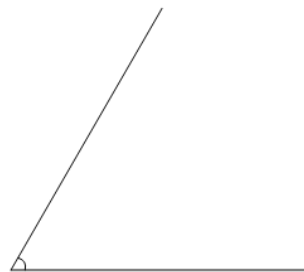
It is not 60° **5**

Is the displayed angle
equal to 30° ?

A

It is not 30°

B


It is 30° **6**

Is the displayed angle
equal to 105° ?

A

It is not 105°

B

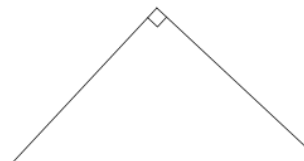
It is 105° **7**

Is the displayed angle
equal to 45° ?

A

It is 45°

B

It is not 45° **8**

Is the displayed angle
equal to 135° ?

A

It is not 135°

B

It is 135°