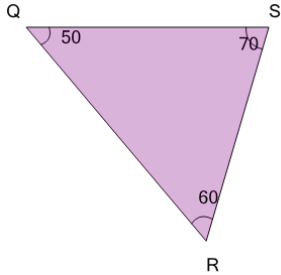


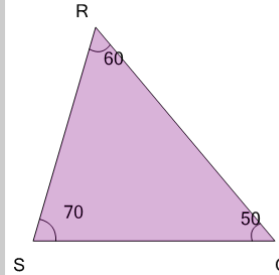


## Angles - Naming - ABC Form to Degrees on a Triangle

**1**

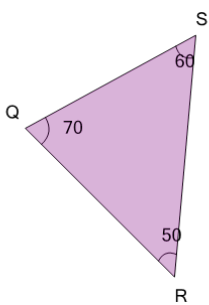
What is the measurement of angle  $\angle SQR$ ?

A	70°	B	60°
C	50°		

**2**

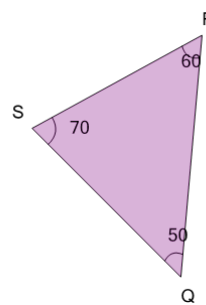
What is the measurement of angle  $\angle RQS$ ?

A	70°	B	50°
C	60°		

**3**

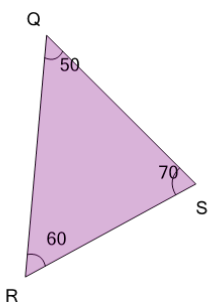
What is the measurement of angle  $\angle RSQ$ ?

A	50°	B	60°
C	70°		

**4**

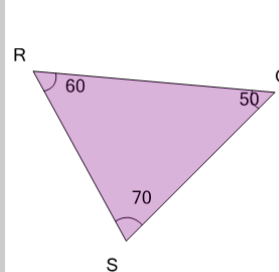
What is the measurement of angle  $\angle SRQ$ ?

A	50°	B	70°
C	60°		

**5**

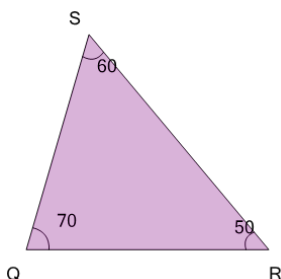
What is the measurement of angle  $\angle SQR$ ?

A	70°	B	60°
C	50°		

**6**

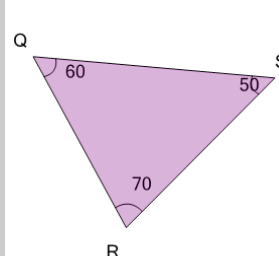
What is the measurement of angle  $\angle RQS$ ?

A	50°	B	70°
C	60°		

**7**

What is the measurement of angle  $\angle RSQ$ ?

A	60°	B	70°
C	50°		

**8**

What is the measurement of angle  $\angle SQR$ ?

A	70°	B	60°
C	50°		