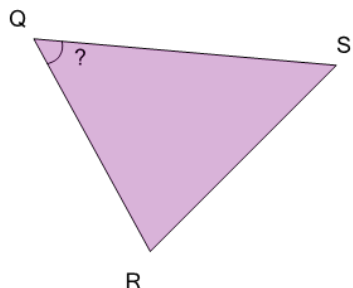


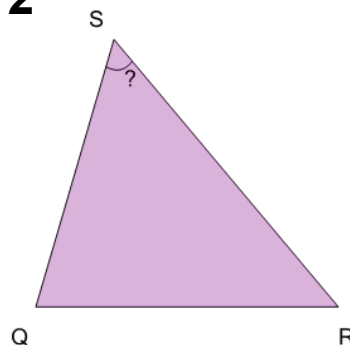


Angles - Naming - Diagram to ABC Form (Simple) on a Triangle

1

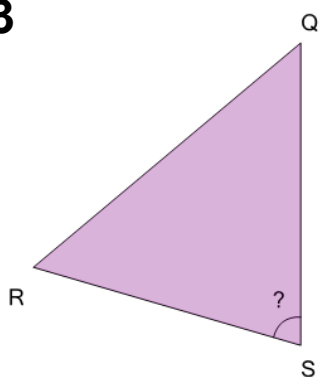
What is the name of the angle marked with '?' on this triangle?

A	B
$\angle QSR$	$\angle SQR$

2

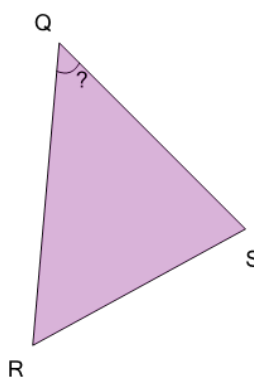
What is the name of the angle marked with '?' on this triangle?

A	B
$\angle RSQ$	$\angle RQS$

3

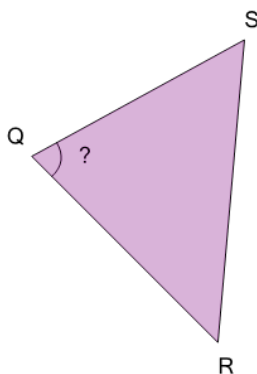
What is the name of the angle marked with '?' on this triangle?

A	B
$\angle SQR$	$\angle RSQ$

4

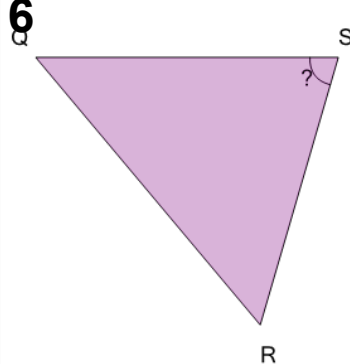
What is the name of the angle marked with '?' on this triangle?

A	B
$\angle SQR$	$\angle QRS$

5

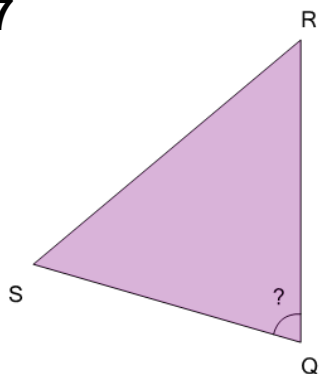
What is the name of the angle marked with '?' on this triangle?

A	B
$\angle SQR$	$\angle QRS$

6

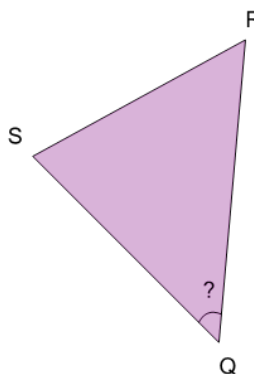
What is the name of the angle marked with '?' on this triangle?

A	B
$\angle QSR$	$\angle QRS$

7

What is the name of the angle marked with '?' on this triangle?

A	B
$\angle QRS$	$\angle SQR$

8

What is the name of the angle marked with '?' on this triangle?

A	B
$\angle RSQ$	$\angle SQR$