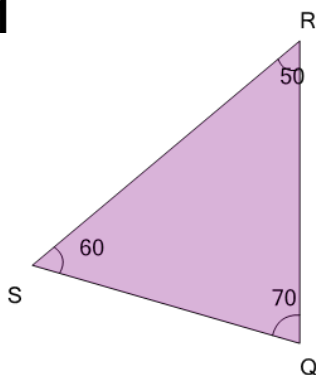


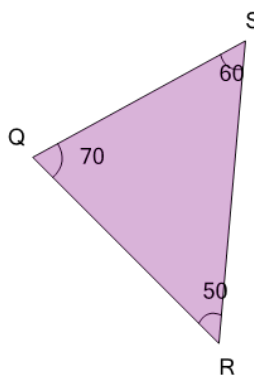


Angles - Naming - Degrees to ABC Form (Simple) on a Triangle

1

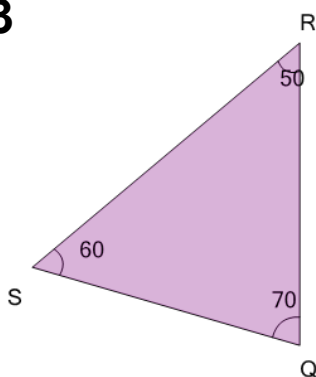
The angle that is 60° would be called what?

A	B
$\angle RSQ$	$\angle SRQ$

2

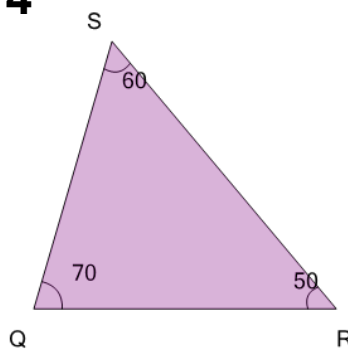
The angle that is 70° would be called what?

A	B
$\angle SQR$	$\angle SRQ$

3

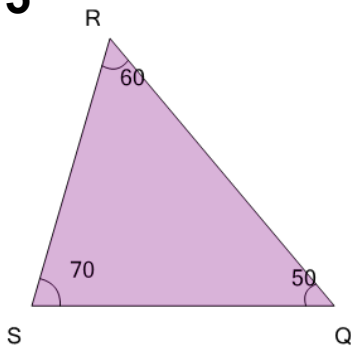
The angle that is 70° would be called what?

A	B
$\angle RQS$	$\angle RSQ$

4

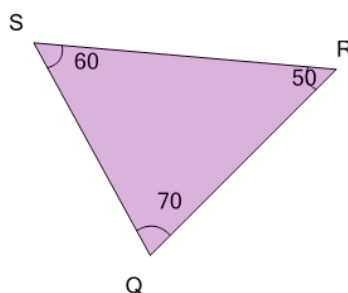
The angle that is 70° would be called what?

A	B
$\angle RQS$	$\angle QRS$

5

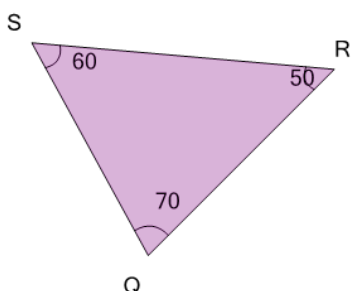
The angle that is 60° would be called what?

A	B
$\angle QRS$	$\angle QSR$

6

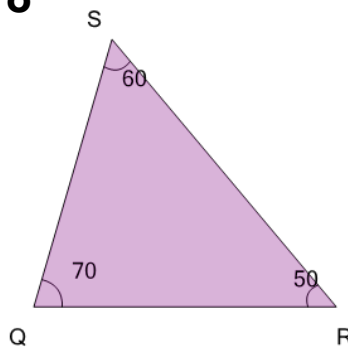
The angle that is 70° would be called what?

A	B
$\angle SRQ$	$\angle RQS$

7

The angle that is 50° would be called what?

A	B
$\angle RQS$	$\angle QRS$

8

The angle that is 60° would be called what?

A	B
$\angle QSR$	$\angle SRQ$