

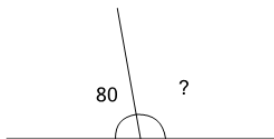


Angles - Remainder of 180 Degree Angle



1

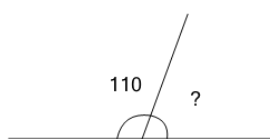
A 180° angle is made up of a 80° angle and another angle. How many degrees is the other angle?



A	B	C
90°	75°	100°
D	E	F
105°	85°	95°

2

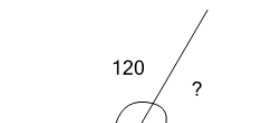
A 180° angle is made up of a 110° angle and another angle. How many degrees is the other angle?



A	B	C
55°	80°	50°
D	E	F
70°	90°	65°

3

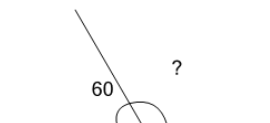
A 180° angle is made up of a 120° angle and another angle. How many degrees is the other angle?



A	B	C
35°	60°	75°
D	E	F
40°	55°	80°

4

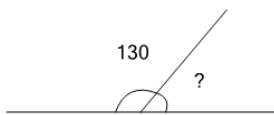
A 180° angle is made up of a 60° angle and another angle. How many degrees is the other angle?



A	B	C
135°	130°	115°
D	E	F
140°	110°	120°

5

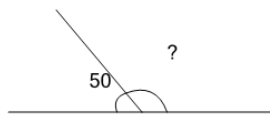
A 180° angle is made up of a 130° angle and another angle. How many degrees is the other angle?



A	B	C
30°	35°	65°
D	E	F
40°	50°	25°

6

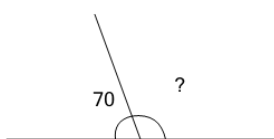
A 180° angle is made up of a 50° angle and another angle. How many degrees is the other angle?



A	B	C
110°	150°	130°
D	E	F
105°	115°	125°

7

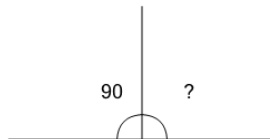
A 180° angle is made up of a 70° angle and another angle. How many degrees is the other angle?



A	B	C
130°	120°	85°
D	E	F
115°	90°	110°

8

A 180° angle is made up of a 90° angle and another angle. How many degrees is the other angle?



A	B	C
110°	75°	90°
D	E	F
100°	70°	80°