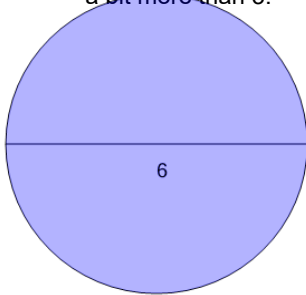


**1**

Find the area without using a calculator. Remember that π is just a bit more than 3.



A

9

B

18.85

C

131.95

D

113.1

E

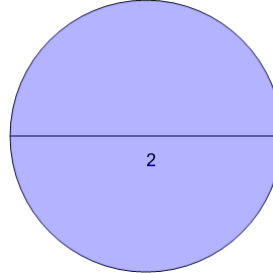
28.27

F

109.96

2

Find the area without using a calculator. Remember that π is just a bit more than 3.



A

62.83

B

2

C

25.13

D

1

E

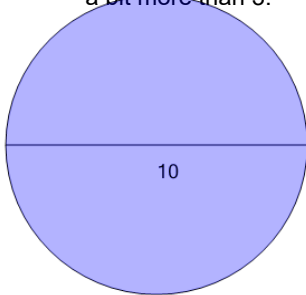
31.42

F

3.14

3

Find the area without using a calculator. Remember that π is just a bit more than 3.



A

78.54

B

25

C

31.42

D

50

E

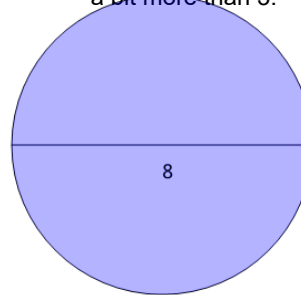
15.71

F

197.92

4

Find the area without using a calculator. Remember that π is just a bit more than 3.



A

50.27

B

16

C

32

D

12.57

E

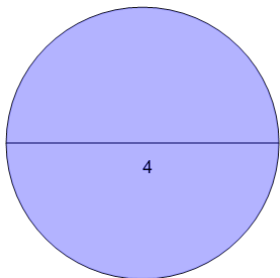
175.93

F

25.13

5

Find the area without using a calculator. Remember that π is just a bit more than 3.



A

62.83

B

56.55

C

6.28

D

4

E

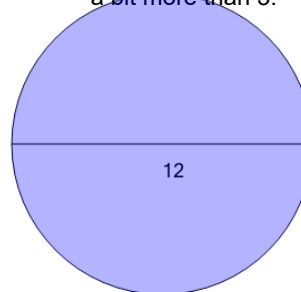
8

F

12.57

6

Find the area without using a calculator. Remember that π is just a bit more than 3.



A

36

B

113.1

C

72

D

197.92

E

18.85

F

37.7