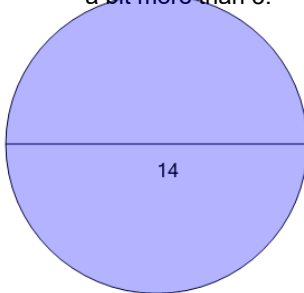
**1**

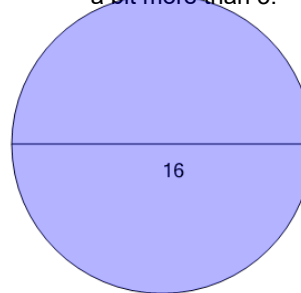
Find the area without using a calculator. Remember that π is just a bit more than 3.



A	43.98	B	21.99
C	226.19	D	98
E	251.33	F	153.94

2

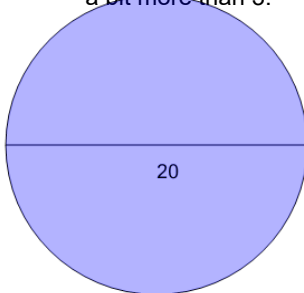
Find the area without using a calculator. Remember that π is just a bit more than 3.



A	311.02	B	201.06
C	314.16	D	376.99
E	128	F	50.27

3

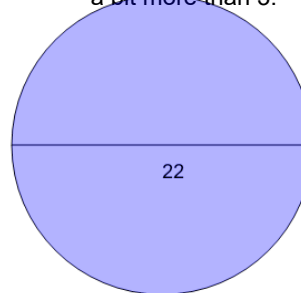
Find the area without using a calculator. Remember that π is just a bit more than 3.



A	414.69	B	527.79
C	314.16	D	100
E	200	F	483.81

4

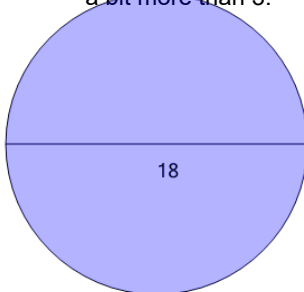
Find the area without using a calculator. Remember that π is just a bit more than 3.



A	69.12	B	242
C	34.56	D	121
E	571.77	F	380.13

5

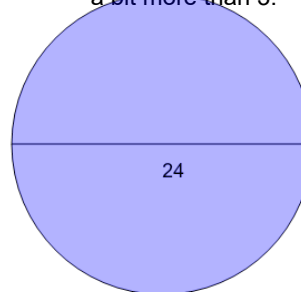
Find the area without using a calculator. Remember that π is just a bit more than 3.



A	81	B	56.55
C	414.69	D	162
E	254.47	F	28.27

6

Find the area without using a calculator. Remember that π is just a bit more than 3.



A	288	B	75.4
C	703.72	D	37.7
E	144	F	452.39