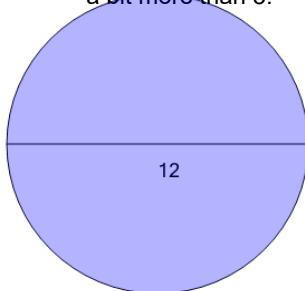




Area of a Circle from Diameter

1

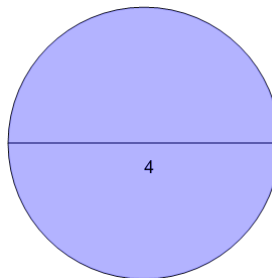
Find the area without using a calculator. Remember that π is just a bit more than 3.



A	18.85	B	282.74
C	175.93	D	72
E	153.94	F	113.1

2

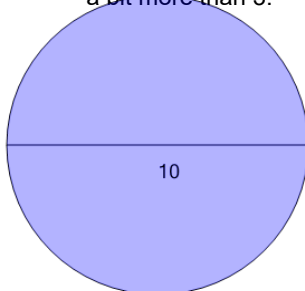
Find the area without using a calculator. Remember that π is just a bit more than 3.



A	8	B	6.28
C	4	D	37.7
E	12.57		

3

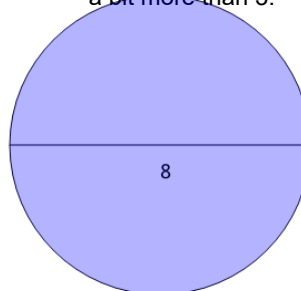
Find the area without using a calculator. Remember that π is just a bit more than 3.



A	50	B	150.8
C	169.65	D	78.54
E	31.42	F	113.1

4

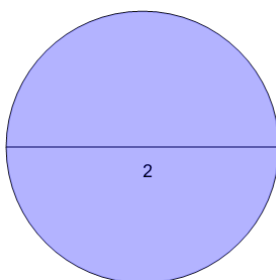
Find the area without using a calculator. Remember that π is just a bit more than 3.



A	50.27	B	25.13
C	16	D	32
E	12.57	F	109.96

5

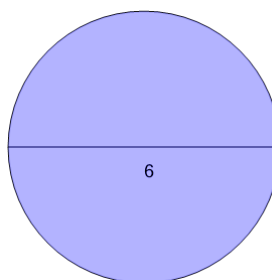
Find the area without using a calculator. Remember that π is just a bit more than 3.



A	3.14	B	2
C	6.28	D	37.7
E	28.27	F	1

6

Find the area without using a calculator. Remember that π is just a bit more than 3.



A	113.1	B	18
C	9.42	D	9
E	28.27	F	18.85