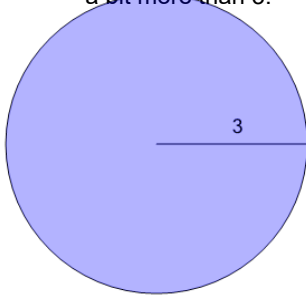
**1**

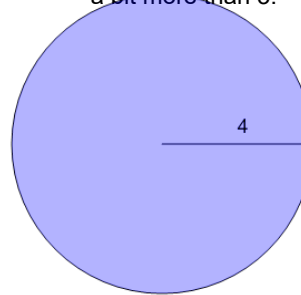
Find the area without using a calculator. Remember that π is just a bit more than 3.



A	28.27	B	9.42
C	131.95	D	78.54
E	18	F	9

2

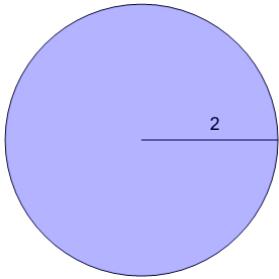
Find the area without using a calculator. Remember that π is just a bit more than 3.



A	175.93	B	50.27
C	16	D	32
E	125.66	F	25.13

3

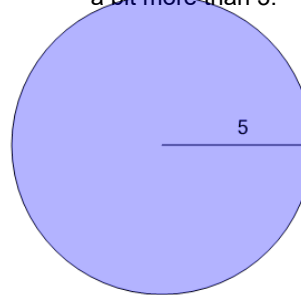
Find the area without using a calculator. Remember that π is just a bit more than 3.



A	6.28	B	12.57
C	4	D	8
E	37.7	F	28.27

4

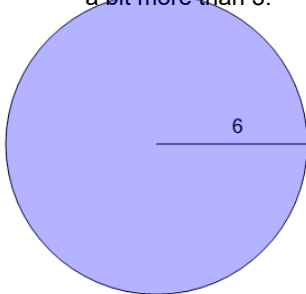
Find the area without using a calculator. Remember that π is just a bit more than 3.



A	201.06	B	31.42
C	25	D	197.92
E	50	F	78.54

5

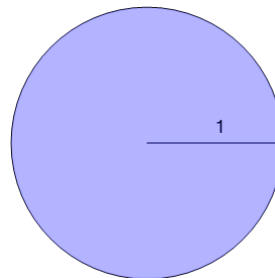
Find the area without using a calculator. Remember that π is just a bit more than 3.



A	113.1	B	254.47
C	72	D	36
E	18.85	F	153.94

6

Find the area without using a calculator. Remember that π is just a bit more than 3.



A	3.14	B	78.54
C	2	D	1
E	6.28	F	12.57