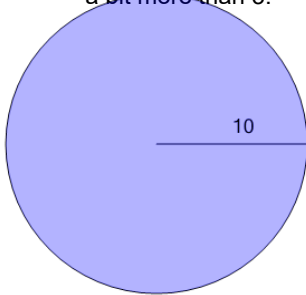
**1**

Find the area without using a calculator. Remember that π is just a bit more than 3.



A

483.81

B

615.75

C

314.16

D

31.42

E

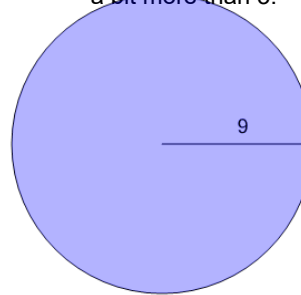
414.69

F

200

2

Find the area without using a calculator. Remember that π is just a bit more than 3.



A

28.27

B

449.25

C

81

D

254.47

E

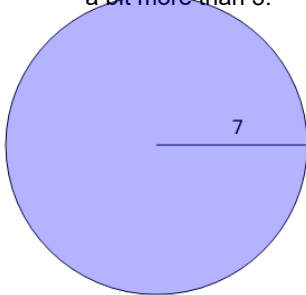
56.55

F

408.41

3

Find the area without using a calculator. Remember that π is just a bit more than 3.



A

380.13

B

153.94

C

43.98

D

21.99

E

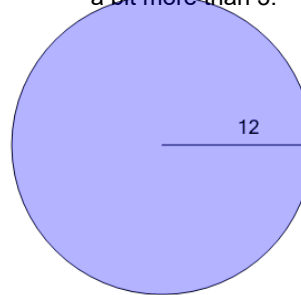
49

F

98

4

Find the area without using a calculator. Remember that π is just a bit more than 3.



A

706.86

B

530.93

C

288

D

452.39

E

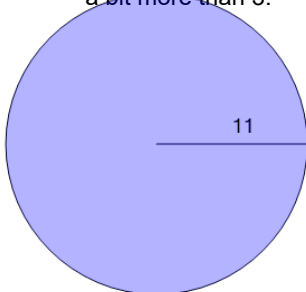
37.7

F

144

5

Find the area without using a calculator. Remember that π is just a bit more than 3.



A

380.13

B

121

C

571.77

D

659.73

E

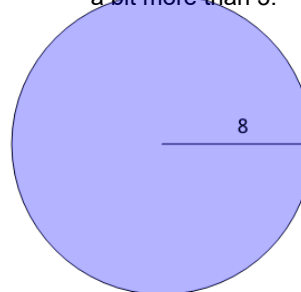
242

F

34.56

6

Find the area without using a calculator. Remember that π is just a bit more than 3.



A

254.47

B

282.74

C

128

D

50.27

E

201.06

F

25.13