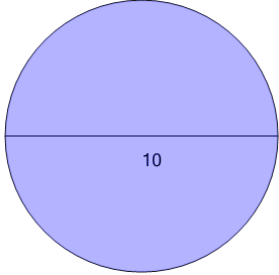
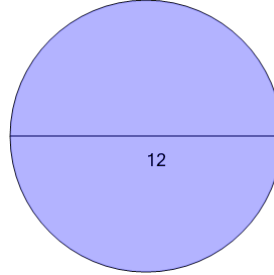


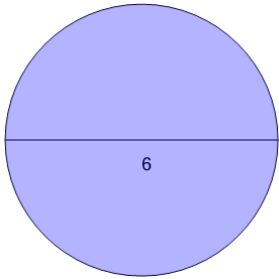
Area of a Circle from Diameter - To Pi Value

1What is the area in terms of π ?

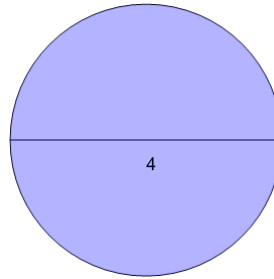
A	25π	B	37π
C	7π	D	5π
E	27π	F	39π

2What is the area in terms of π ?

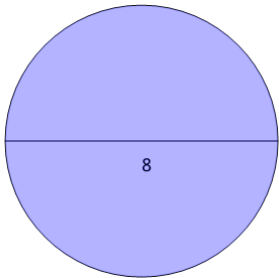
A	15π	B	9π
C	36π	D	42π
E	18π	F	30π

3What is the area in terms of π ?

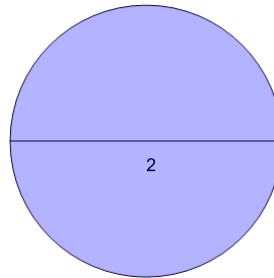
A	2π	B	18π
C	4π	D	9π
E	10π	F	16π

4What is the area in terms of π ?

A	13π	B	9π
C	2π	D	4π
E	1π	F	3π

5What is the area in terms of π ?

A	11π	B	22π
C	16π	D	8π
E	13π	F	20π

6What is the area in terms of π ?

A	10π	B	7π
C	1π	D	2π
E	6π	F	4π