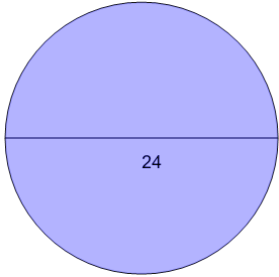
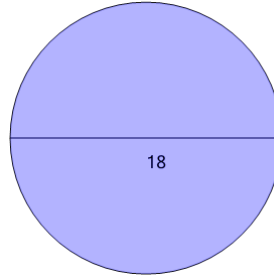


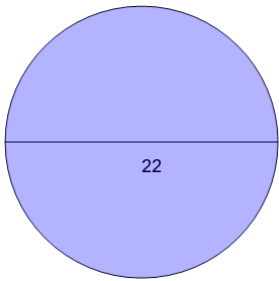
Area of a Circle from Diameter - To Pi Value

1What is the area in terms of π ?

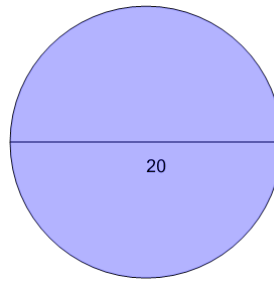
A	46π	B	172π
C	256π	D	144π
E	18π	F	242π

2What is the area in terms of π ?

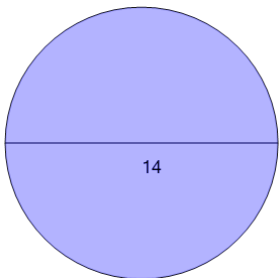
A	105π	B	9π
C	1π	D	113π
E	97π	F	81π

3What is the area in terms of π ?

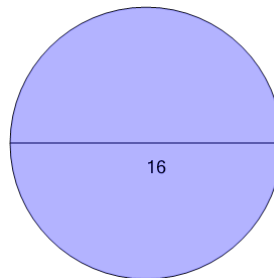
A	157π	B	49π
C	37π	D	193π
E	121π	F	85π

4What is the area in terms of π ?

A	20π	B	100π
C	130π	D	160π
E	60π	F	190π

5What is the area in terms of π ?

A	57π	B	17π
C	85π	D	49π
E	41π	F	29π

6What is the area in terms of π ?

A	34π	B	46π
C	64π	D	106π
E	52π	F	118π