







## Area of a Simple Shape Formula - Words to Shape



1

What shape's area would you calculate like this

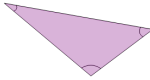


half the base times the height

|   |   |   |   |
|---|---|---|---|
| A |  | B |  |
| C |  |   |   |
|   |   |   |   |

2

What shape's area would you calculate like this

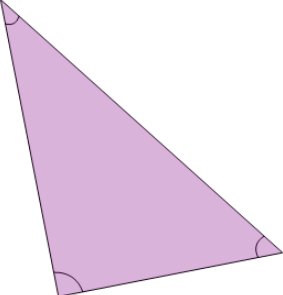

length times width

|   |   |   |   |   |   |
|---|---|---|---|---|---|
| A |  | B |  | C |  |
|---|---|---|---|---|---|

3

What shape's area would you calculate like this

side times side

|   |   |   |  |
|---|---|---|--|
| A |  | B |  |
|---|---|---|--|