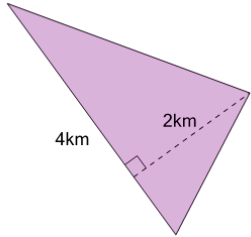


**1**

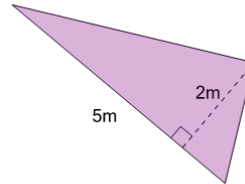
Find the area of the triangle



A	$35\text{km}^2$	B	$4\text{km}^2$
C	$21\text{km}^2$	D	$12\text{km}^2$
E	$8\text{km}^2$		

**2**

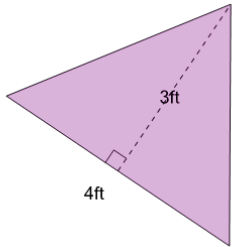
Find the area of the triangle



A	$7.5\text{m}^2$	B	$45\text{m}^2$
C	$5\text{m}^2$	D	$10\text{m}^2$

**3**

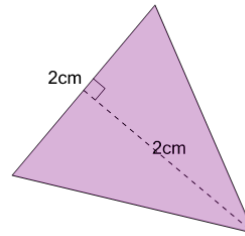
Find the area of the triangle



A	$6\text{ft}^2$	B	$14\text{ft}^2$
C	$25\text{ft}^2$	D	$2.7\text{ft}^2$

**4**

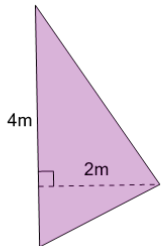
Find the area of the triangle



A	$2\text{cm}^2$	B	$4\text{cm}^2$
C	$8\text{cm}^2$		

**5**

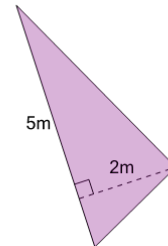
Find the area of the triangle



A	$6\text{m}^2$	B	$4\text{m}^2$
C	$24\text{m}^2$	D	$8\text{m}^2$

**6**

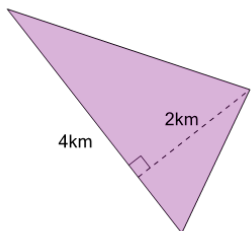
Find the area of the triangle



A	$35\text{m}^2$	B	$5\text{m}^2$
C	$10\text{m}^2$		

**7**

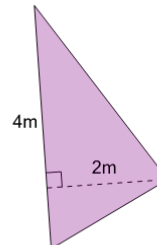
Find the area of the triangle



A	$8\text{km}^2$	B	$4\text{km}^2$
C	$18\text{km}^2$	D	$36\text{km}^2$

**8**

Find the area of the triangle



A	$12\text{m}^2$	B	$8\text{m}^2$
C	$20\text{m}^2$	D	$4\text{m}^2$