




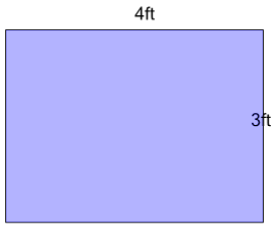
mobius

Area of a Rectangle

Name _____



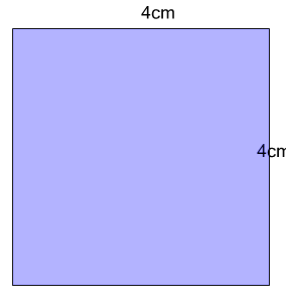
1



Find the area of this rectangle

- | | | | |
|---|-----------------|---|-----------------|
| A | 12ft^2 | B | 14ft^2 |
| C | 35ft^2 | D | 7ft^2 |
| | | | |


2



Find the area of this rectangle

- | | | | |
|---|-----------------|---|-----------------|
| A | 16cm^2 | B | 56cm^2 |
| C | 8cm^2 | | |
| | | | |


3



Find the area of this rectangle

- | | | | |
|---|----------------|---|----------------|
| A | 7m^2 | B | 6m^2 |
| C | 12m^2 | D | 14m^2 |
| | | | |

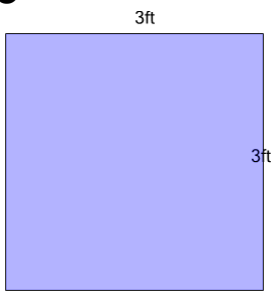
4



Find the area of this rectangle

- | | | | |
|---|-----------------|---|----------------|
| A | 12ft^2 | B | 6ft^2 |
| C | 14ft^2 | D | 7ft^2 |
| | | | |

5



Find the area of this rectangle

- | | | | |
|---|-----------------|---|----------------|
| A | 12ft^2 | B | 6ft^2 |
| C | 42ft^2 | D | 9ft^2 |
| | | | |

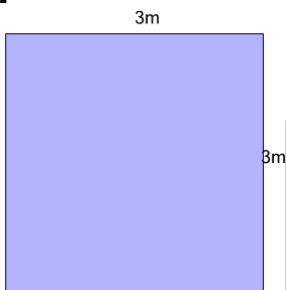
6



Find the area of this rectangle

- | | | | |
|---|----------------|---|----------------|
| A | 5km^2 | B | 6km^2 |
| C | 4km^2 | | |
| | | | |

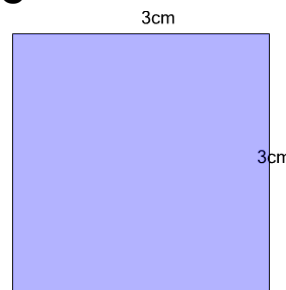
7



Find the area of this rectangle

- | | | | |
|---|----------------|---|---------------|
| A | 9m^2 | B | 6m^2 |
| C | 42m^2 | | |
| | | | |

8



Find the area of this rectangle

- | | | | |
|---|-----------------|---|-----------------|
| A | 9cm^2 | B | 6cm^2 |
| C | 28cm^2 | D | 12cm^2 |
| | | | |