



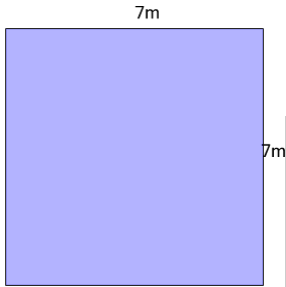
# mobius

## Area of a Rectangle

Name \_\_\_\_\_



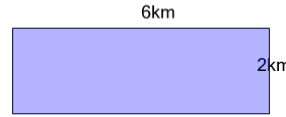
1



Find the area of this rectangle

- |   |                 |   |                |
|---|-----------------|---|----------------|
| A | $88\text{m}^2$  | B | $14\text{m}^2$ |
| C | $100\text{m}^2$ | D | $49\text{m}^2$ |
|   |                 |   |                |

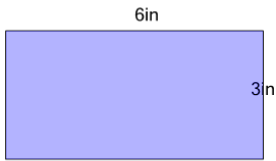
2



Find the area of this rectangle

- |   |                 |   |                |
|---|-----------------|---|----------------|
| A | $16\text{km}^2$ | B | $4\text{km}^2$ |
| C | $12\text{km}^2$ |   |                |
|   |                 |   |                |

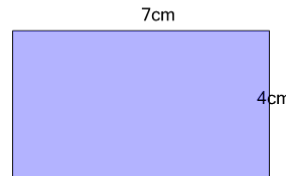
3



Find the area of this rectangle

- |   |                 |   |                 |
|---|-----------------|---|-----------------|
| A | $12\text{in}^2$ | B | $18\text{in}^2$ |
| C | $9\text{in}^2$  | D | $6\text{in}^2$  |
|   |                 |   |                 |


4



Find the area of this rectangle

- |   |                 |   |                 |
|---|-----------------|---|-----------------|
| A | $22\text{cm}^2$ | B | $8\text{cm}^2$  |
| C | $63\text{cm}^2$ | D | $28\text{cm}^2$ |
|   |                 |   |                 |

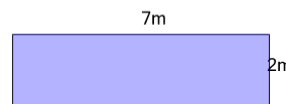
5



Find the area of this rectangle

- |   |                 |   |                 |
|---|-----------------|---|-----------------|
| A | $80\text{cm}^2$ | B | $24\text{cm}^2$ |
| C | $56\text{cm}^2$ | D | $10\text{cm}^2$ |
| E | $50\text{cm}^2$ |   |                 |

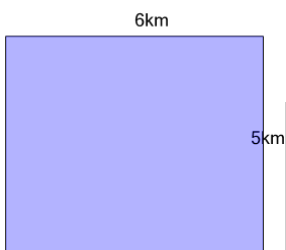
6



Find the area of this rectangle

- |   |                |   |                |
|---|----------------|---|----------------|
| A | $14\text{m}^2$ | B | $18\text{m}^2$ |
| C | $4\text{m}^2$  |   |                |
|   |                |   |                |


7



Find the area of this rectangle

- |   |                 |   |                 |
|---|-----------------|---|-----------------|
| A | $56\text{km}^2$ | B | $30\text{km}^2$ |
| C | $11\text{km}^2$ | D | $22\text{km}^2$ |
| E | $64\text{km}^2$ |   |                 |

8



Find the area of this rectangle

- |   |                 |   |                 |
|---|-----------------|---|-----------------|
| A | $14\text{ft}^2$ | B | $24\text{ft}^2$ |
| C | $77\text{ft}^2$ | D | $35\text{ft}^2$ |
| E | $90\text{ft}^2$ |   |                 |