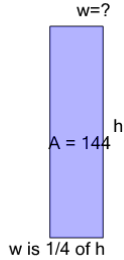


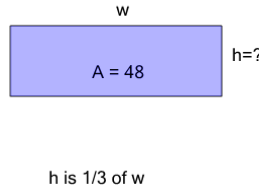


## Area of a Rectangle - Side from Area and Side Ratio (Fractional)

**1**

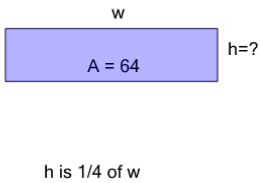
Find the missing side length of this rectangle

A	2	B	12
C	6	D	13
E	3	F	14

**2**

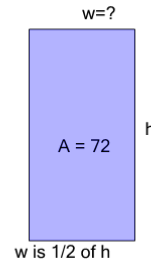
Find the missing side length of this rectangle

A	4	B	3
C	5	D	1
E	12	F	13

**3**

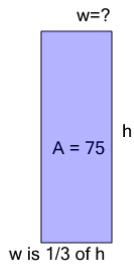
Find the missing side length of this rectangle

A	1	B	9
C	11	D	4
E	2	F	5

**4**

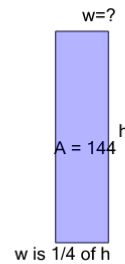
Find the missing side length of this rectangle

A	14	B	13
C	3	D	8
E	6	F	2

**5**

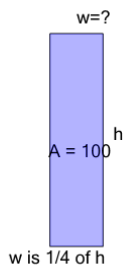
Find the missing side length of this rectangle

A	11	B	9
C	1	D	5
E	12	F	2

**6**

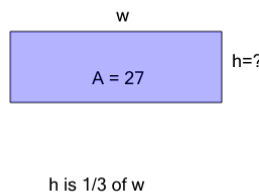
Find the missing side length of this rectangle

A	4	B	1
C	13	D	3
E	6	F	2

**7**

Find the missing side length of this rectangle

A	14	B	2
C	13	D	1
E	5	F	10

**8**

Find the missing side length of this rectangle

A	10	B	3
C	12	D	5
E	9	F	4