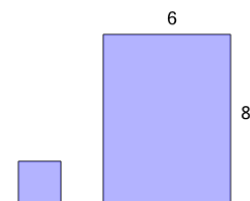




Area of a Rectangle - Tile Coverage from Length and Width vs Area

**1**

How many of the smaller tiles will it take to cover the larger area?

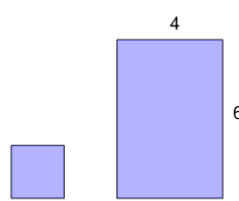


A=4

A	10	B	12
C	9	D	18
E	19	F	5

2

How many of the smaller tiles will it take to cover the larger area?

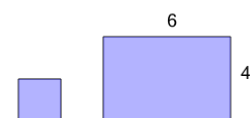


A=4

A	3	B	7
C	4	D	11
E	8	F	6

3

How many of the smaller tiles will it take to cover the larger area?

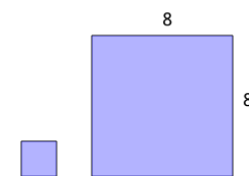


A=4

A	9	B	6
C	2	D	14
E	4	F	3

4

How many of the smaller tiles will it take to cover the larger area?

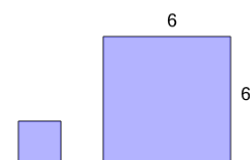


A=4

A	18	B	17
C	16	D	13
E	7	F	12

5

How many of the smaller tiles will it take to cover the larger area?



A=4

A	4	B	16
C	9	D	17
E	3	F	8

6

How many of the smaller tiles will it take to cover the larger area?

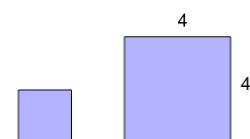


A=4

A	1	B	8
C	15	D	6
E	14	F	9

7

How many of the smaller tiles will it take to cover the larger area?

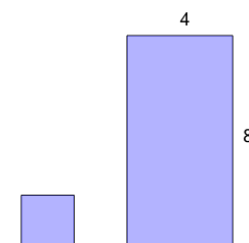


A=4

A	7	B	1
C	6	D	4
E	2	F	3

8

How many of the smaller tiles will it take to cover the larger area?



A=4

A	7	B	12
C	17	D	16
E	13	F	8