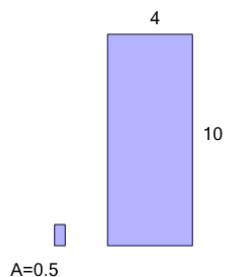


Area of a Rectangle - Tile Coverage from Length and Width vs Area

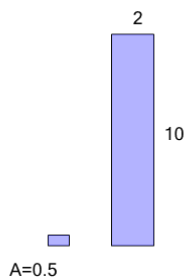
1



How many of the smaller tiles will it take to cover the larger area?

A	64	B	128
C	16	D	80
E	56	F	112

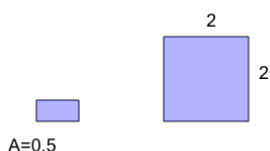
2



How many of the smaller tiles will it take to cover the larger area?

A	48	B	56
C	24	D	40
E	36	F	60

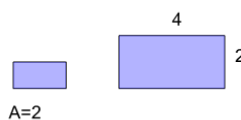
3



How many of the smaller tiles will it take to cover the larger area?

A	1	B	8
C	14	D	16
E	12	F	3

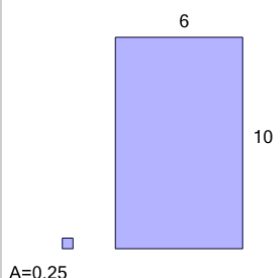
4



How many of the smaller tiles will it take to cover the larger area?

A	7	B	13
C	6	D	1
E	4	F	8

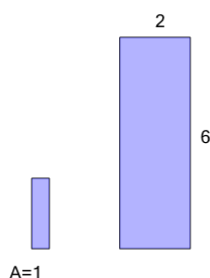
5



How many of the smaller tiles will it take to cover the larger area?

A	288	B	432
C	264	D	48
E	72	F	240

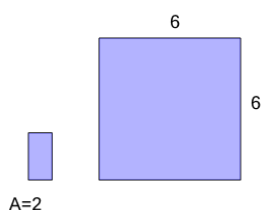
6



How many of the smaller tiles will it take to cover the larger area?

A	12	B	6
C	20	D	18
E	3	F	10

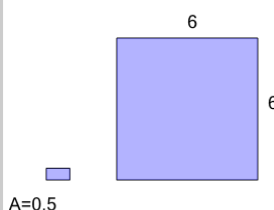
7



How many of the smaller tiles will it take to cover the larger area?

A	16	B	20
C	21	D	25
E	18	F	17

8



How many of the smaller tiles will it take to cover the larger area?

A	86	B	9
C	128	D	72
E	121	F	114