
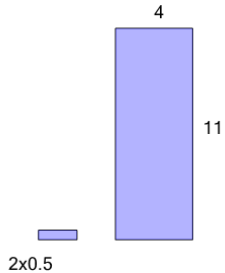




Area of a Rectangle - Tile Coverage from Length and Width



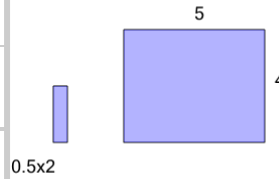
1



How many of the smaller tiles will it take to cover the larger area?

A	44	B	20
C	12	D	64
E	76	F	24

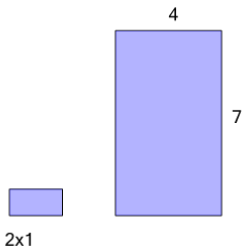
2



How many of the smaller tiles will it take to cover the larger area?

A	8	B	38
C	6	D	20
E	14	F	16

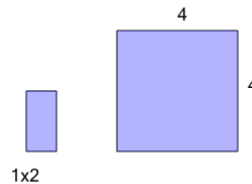
3



How many of the smaller tiles will it take to cover the larger area?

A	6	B	10
C	21	D	19
E	14	F	16

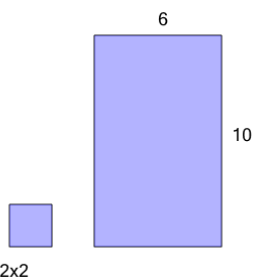
4



How many of the smaller tiles will it take to cover the larger area?

A	10	B	16
C	11	D	8
E	13	F	3


5



How many of the smaller tiles will it take to cover the larger area?

A	20	B	10
C	15	D	9
E	19	F	18

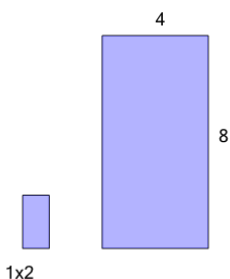
6



How many of the smaller tiles will it take to cover the larger area?

A	16	B	52
C	44	D	24
E	64	F	20

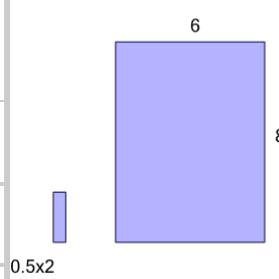
7



How many of the smaller tiles will it take to cover the larger area?

A	17	B	16
C	12	D	13
E	10	F	22

8



How many of the smaller tiles will it take to cover the larger area?

A	40	B	24
C	76	D	36
E	64	F	48