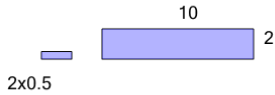


Area of a Rectangle - Tile Coverage from Length and Width

1

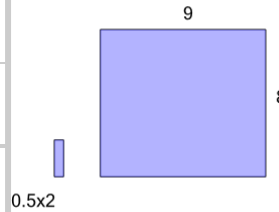
How many of the smaller tiles will it take to cover the larger area?



A	22	B	20
C	14	D	18
E	12	F	32

2

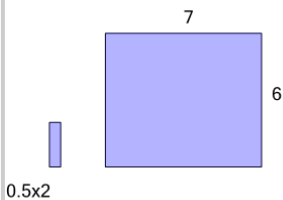
How many of the smaller tiles will it take to cover the larger area?



A	65	B	86
C	2	D	23
E	72	F	58

3

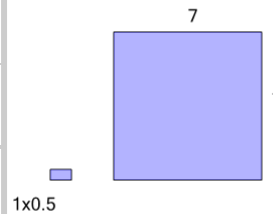
How many of the smaller tiles will it take to cover the larger area?



A	26	B	10
C	62	D	14
E	58	F	42

4

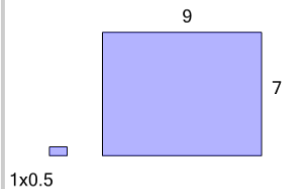
How many of the smaller tiles will it take to cover the larger area?



A	89	B	35
C	26	D	98
E	116	F	71

5

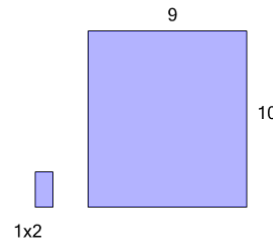
How many of the smaller tiles will it take to cover the larger area?



A	126	B	90
C	174	D	18
E	66	F	186

6

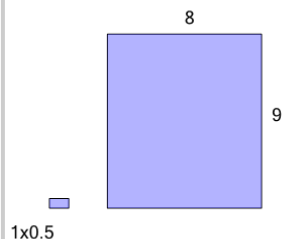
How many of the smaller tiles will it take to cover the larger area?



A	73	B	9
C	45	D	29
E	81	F	77

7

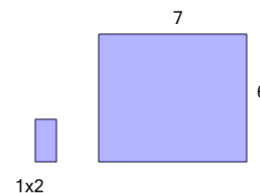
How many of the smaller tiles will it take to cover the larger area?



A	60	B	144
C	32	D	130
E	242	F	200

8

How many of the smaller tiles will it take to cover the larger area?



A	1	B	37
C	33	D	23
E	25	F	21