



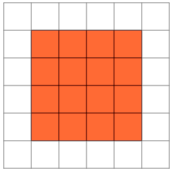
Area of a Shape on a Grid - Largest Area, Either Shape



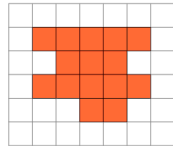
1

Which shape on the 1x1 grid has the largest area?

A



B



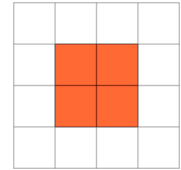
2

Which shape on the 1x1 grid has the largest area?

A



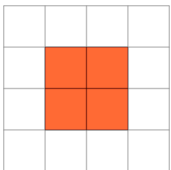
B



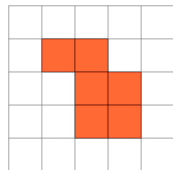
3

Which shape on the 1x1 grid has the largest area?

A



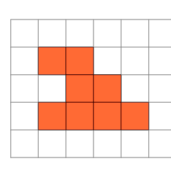
B



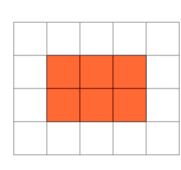
4

Which shape on the 1x1 grid has the largest area?

A



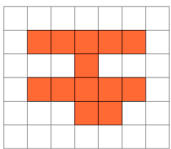
B



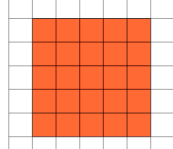
5

Which shape on the 1x1 grid has the largest area?

A



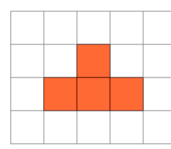
B



6

Which shape on the 1x1 grid has the largest area?

A



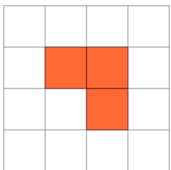
B



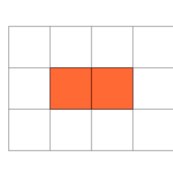
7

Which shape on the 1x1 grid has the largest area?

A



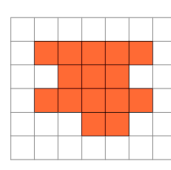
B



8

Which shape on the 1x1 grid has the largest area?

A



B

