

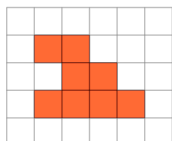


Area of a Shape on a Grid - Largest Area, Irregular Shape

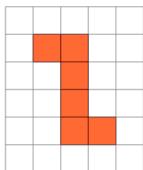
**1**

Which shape on the 1x1 grid has the largest area?

A

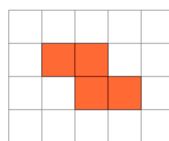


B

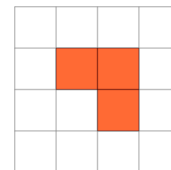
**2**

Which shape on the 1x1 grid has the largest area?

A

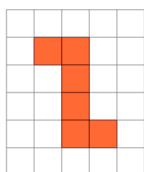


B

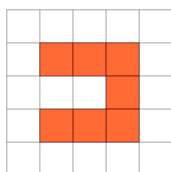
**3**

Which shape on the 1x1 grid has the largest area?

A

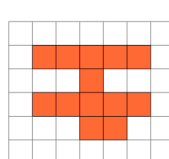


B

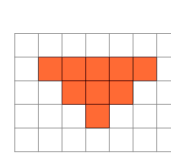
**4**

Which shape on the 1x1 grid has the largest area?

A

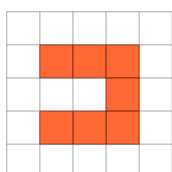


B

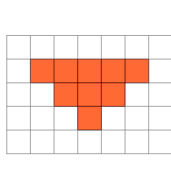
**5**

Which shape on the 1x1 grid has the largest area?

A

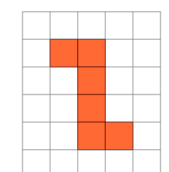


B

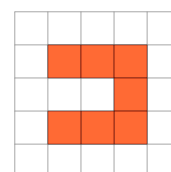
**6**

Which shape on the 1x1 grid has the largest area?

A

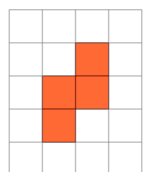


B

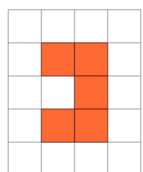
**7**

Which shape on the 1x1 grid has the largest area?

A

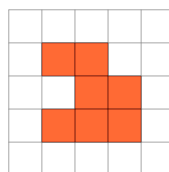


B

**8**

Which shape on the 1x1 grid has the largest area?

A



B

