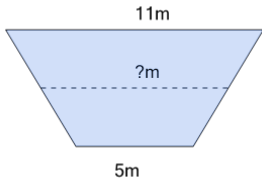




Area of a Trapezoid Setup - Average of Uneven Sides

1

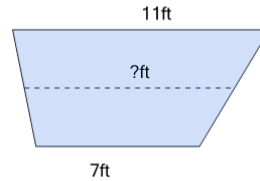
Find the average length of the trapezoid



A	4.5m	B	8m
C	4m	D	10m
E	7m		

2

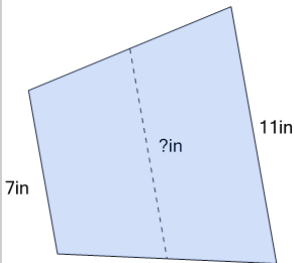
Find the average length of the trapezoid



A	12ft	B	11.5ft
C	9ft	D	7ft

3

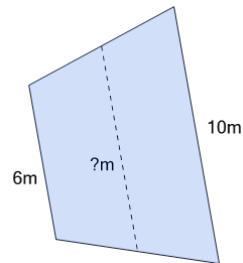
Find the average length of the trapezoid



A	9in	B	4.5in
C	7.5in	D	8in
E	11.5in		

4

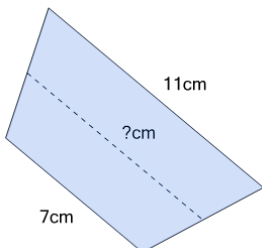
Find the average length of the trapezoid



A	8m	B	7m
C	4m	D	9m

5

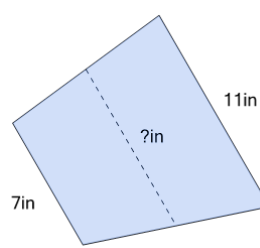
Find the average length of the trapezoid



A	3.5cm	B	7.5cm
C	6cm	D	11.5cm
E	9cm		

6

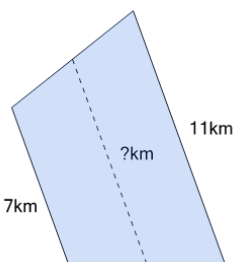
Find the average length of the trapezoid



A	11.5in	B	4in
C	7.5in	D	12in
E	9in		

7

Find the average length of the trapezoid



A	4km	B	9km
C	8.5km	D	5km