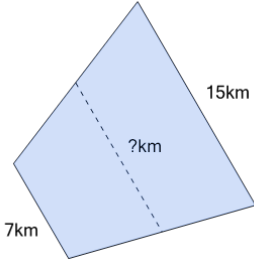
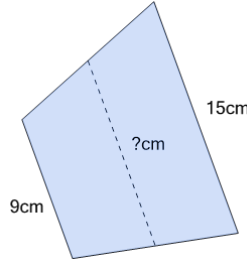


Area of a Trapezoid Setup - Average of Uneven Sides

1

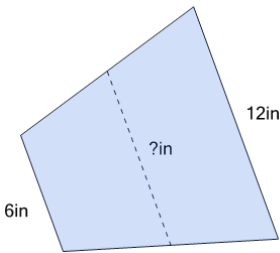
Find the average length of the trapezoid

A	4km	B	11km
C	10.5km	D	7km
E	11.5km		

2

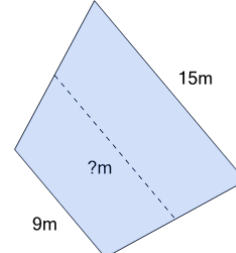
Find the average length of the trapezoid

A	15cm	B	6.5cm
C	13cm	D	12.5cm
E	12cm		

3

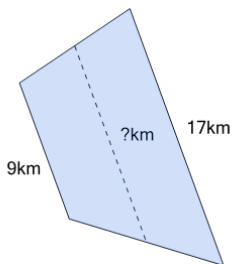
Find the average length of the trapezoid

A	8.5in	B	9in
C	7.5in	D	8in
E	10in		

4

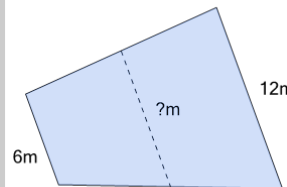
Find the average length of the trapezoid

A	15.5m	B	5.5m
C	11.5m	D	12.5m
E	12m		

5

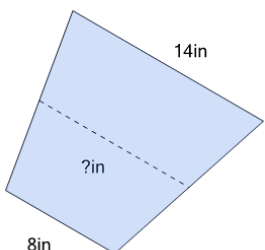
Find the average length of the trapezoid

A	8.5km	B	12km
C	8km	D	7km
E	13km		

6

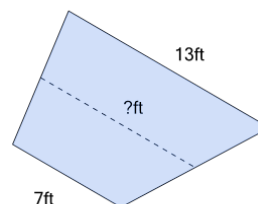
Find the average length of the trapezoid

A	9m	B	9.5m
C	10m	D	10.5m

7

Find the average length of the trapezoid

A	9in	B	4.5in
C	11in	D	10.5in

8

Find the average length of the trapezoid

A	10ft	B	6ft
C	11ft	D	10.5ft
E	5.5ft		