




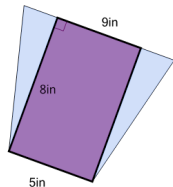
Area of a Trapezoid - Equivalent Rectangle Fit



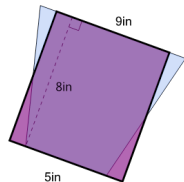
1

Which image shows the rectangle with the same area as the trapezoid?

A



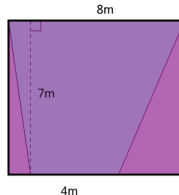
B



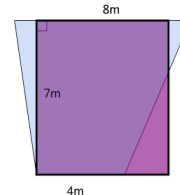
2

Which image shows the rectangle with the same area as the trapezoid?

A



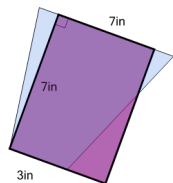
B



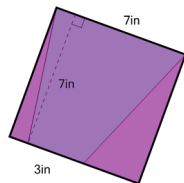
3

Which image shows the rectangle with the same area as the trapezoid?

A



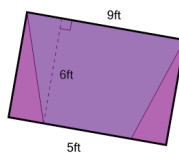
B



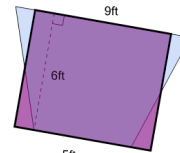
4

Which image shows the rectangle with the same area as the trapezoid?

A



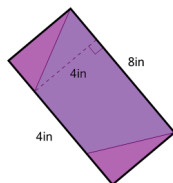
B



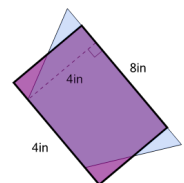
5

Which image shows the rectangle with the same area as the trapezoid?

A



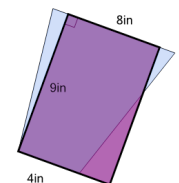
B



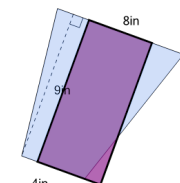
6

Which image shows the rectangle with the same area as the trapezoid?

A



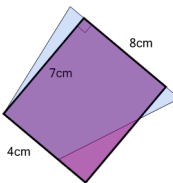
B



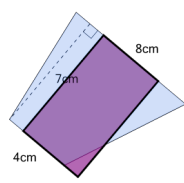
7

Which image shows the rectangle with the same area as the trapezoid?

A



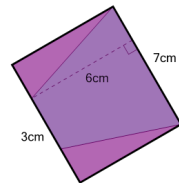
B



8

Which image shows the rectangle with the same area as the trapezoid?

A



B

