

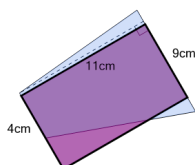


## Area of a Trapezoid - Equivalent Rectangle Fit

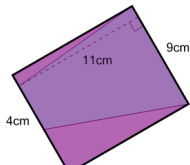
**1**

Which image shows the rectangle with the same area as the trapezoid?

A

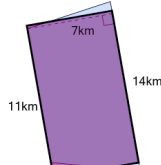


B

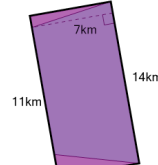
**2**

Which image shows the rectangle with the same area as the trapezoid?

A

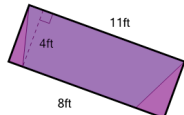


B

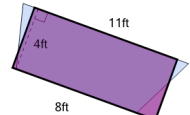
**3**

Which image shows the rectangle with the same area as the trapezoid?

A

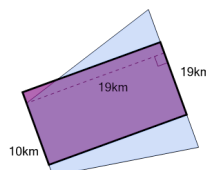


B

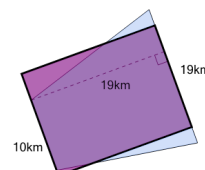
**4**

Which image shows the rectangle with the same area as the trapezoid?

A

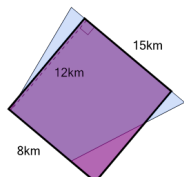


B

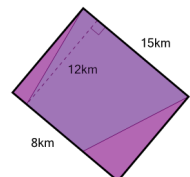
**5**

Which image shows the rectangle with the same area as the trapezoid?

A

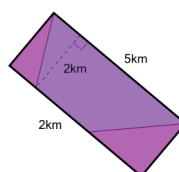


B

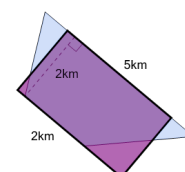
**6**

Which image shows the rectangle with the same area as the trapezoid?

A

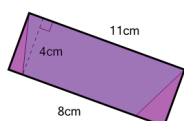


B

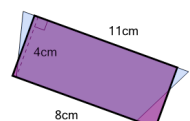
**7**

Which image shows the rectangle with the same area as the trapezoid?

A

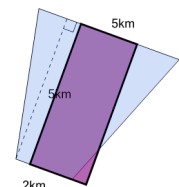


B

**8**

Which image shows the rectangle with the same area as the trapezoid?

A



B

