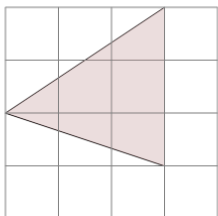




Area of an Acute Triangle - On Grid - Image to Area

1

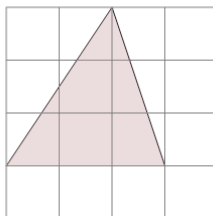
Find the area of the triangle on this grid of 1x1 squares



A	8	B	6
C	1	D	8.5
E	4.5	F	4

2

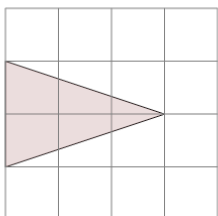
Find the area of the triangle on this grid of 1x1 squares



A	3.5	B	8
C	0.5	D	1.5
E	9	F	4.5

3

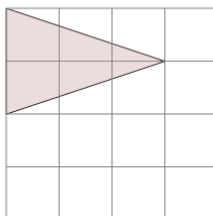
Find the area of the triangle on this grid of 1x1 squares



A	3	B	1
C	7.5	D	6.5
E	5.5	F	0.5

4

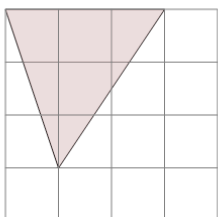
Find the area of the triangle on this grid of 1x1 squares



A	2	B	1
C	3.5	D	1.5
E	3	F	7

5

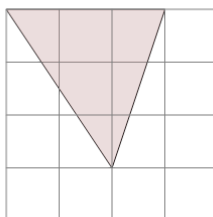
Find the area of the triangle on this grid of 1x1 squares



A	4.5	B	8.5
C	3	D	8
E	7	F	1.5

6

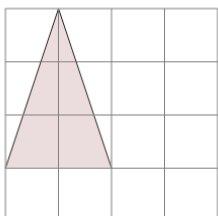
Find the area of the triangle on this grid of 1x1 squares



A	4.5	B	3
C	6.5	D	2.5
E	8.5	F	5

7

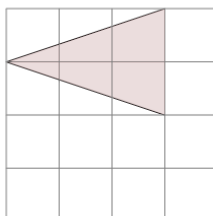
Find the area of the triangle on this grid of 1x1 squares



A	5.5	B	2
C	7	D	0.5
E	3	F	1.5

8

Find the area of the triangle on this grid of 1x1 squares



A	4	B	5.5
C	5	D	3
E	4.5	F	6.5