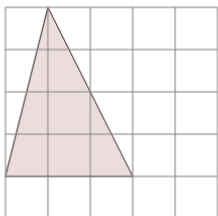


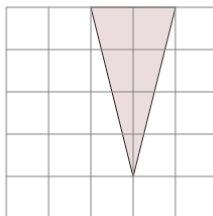


Area of an Acute Triangle - On Grid - Image to Area

1

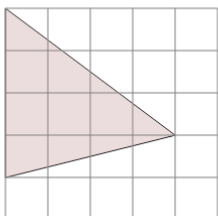
Find the area of the triangle on this grid of 1x1 squares

A	8.5	B	3.5
C	10.5	D	6
E	2	F	10

2

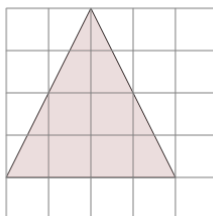
Find the area of the triangle on this grid of 1x1 squares

A	0.5	B	3
C	2.5	D	8
E	4	F	6.5

3

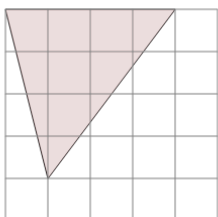
Find the area of the triangle on this grid of 1x1 squares

A	5	B	9
C	4.5	D	8.5
E	7	F	8

4

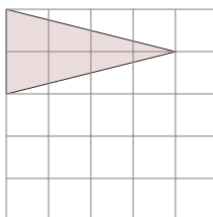
Find the area of the triangle on this grid of 1x1 squares

A	6	B	7
C	10	D	7.5
E	8	F	12

5

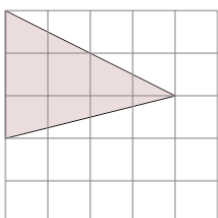
Find the area of the triangle on this grid of 1x1 squares

A	3	B	10
C	11.5	D	11
E	7	F	8

6

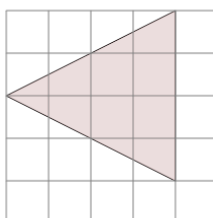
Find the area of the triangle on this grid of 1x1 squares

A	4	B	4.5
C	5	D	1.5
E	8.5	F	7

7

Find the area of the triangle on this grid of 1x1 squares

A	4.5	B	1
C	8.5	D	5.5
E	9.5	F	6

8

Find the area of the triangle on this grid of 1x1 squares

A	12	B	5.5
C	11	D	4.5
E	8	F	7.5