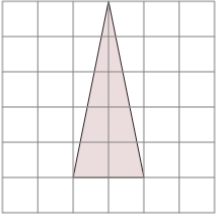


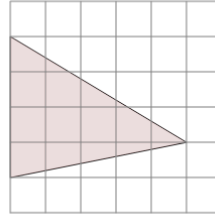


Area of an Acute Triangle - On Grid - Image to Area

1

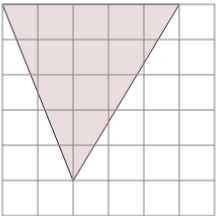
Find the area of the triangle on this grid of 1x1 squares

A	4	B	1.5
C	9.5	D	5
E	8	F	9

2

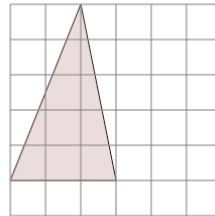
Find the area of the triangle on this grid of 1x1 squares

A	3	B	6
C	2	D	7
E	10	F	9

3

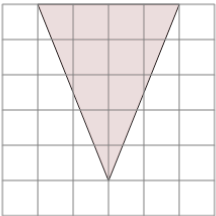
Find the area of the triangle on this grid of 1x1 squares

A	20.5	B	4.5
C	13.5	D	12.5
E	8.5	F	21.5

4

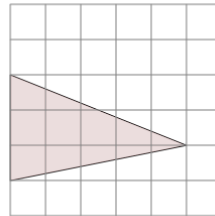
Find the area of the triangle on this grid of 1x1 squares

A	11	B	9
C	4	D	3
E	7.5	F	5.5

5

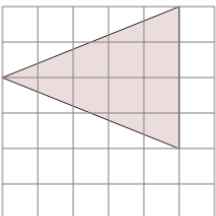
Find the area of the triangle on this grid of 1x1 squares

A	7	B	5
C	13	D	8
E	2	F	10

6

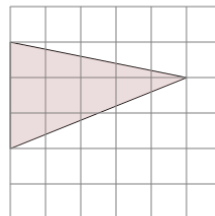
Find the area of the triangle on this grid of 1x1 squares

A	2.5	B	9.5
C	7.5	D	8.5
E	7	F	10.5

7

Find the area of the triangle on this grid of 1x1 squares

A	14	B	6
C	9	D	5
E	10	F	1

8

Find the area of the triangle on this grid of 1x1 squares

A	7.5	B	6.5
C	10	D	8
E	3	F	10.5