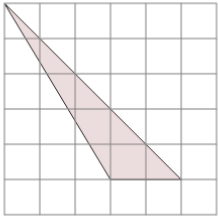


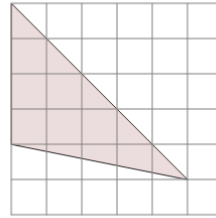


## Area of an Obtuse Triangle - On Grid - Image to Area

**1**

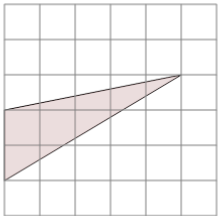
Find the area of the triangle on this grid of 1x1 squares

A	9.5	B	9
C	0.5	D	5
E	4.5	F	7

**2**

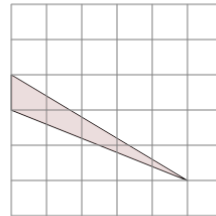
Find the area of the triangle on this grid of 1x1 squares

A	18	B	3
C	4	D	10
E	6	F	13

**3**

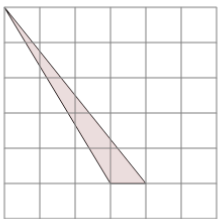
Find the area of the triangle on this grid of 1x1 squares

A	9	B	6
C	4	D	2
E	5	F	1.5

**4**

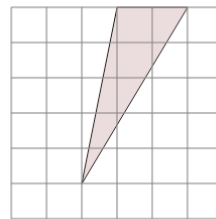
Find the area of the triangle on this grid of 1x1 squares

A	1.5	B	2
C	6	D	2.5
E	1	F	4

**5**

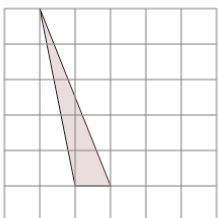
Find the area of the triangle on this grid of 1x1 squares

A	5.5	B	3.5
C	1.5	D	0.5
E	2.5	F	2

**6**

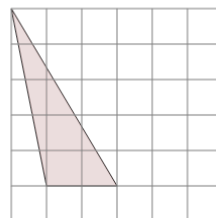
Find the area of the triangle on this grid of 1x1 squares

A	1.5	B	8
C	3	D	5
E	6.5	F	4.5

**7**

Find the area of the triangle on this grid of 1x1 squares

A	2.5	B	1
C	1.5	D	5
E	6.5	F	4

**8**

Find the area of the triangle on this grid of 1x1 squares

A	3.5	B	7
C	6	D	8
E	5	F	5.5