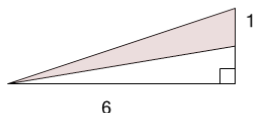




Area of an Obtuse Triangle - Section of Right Triangle

**1**

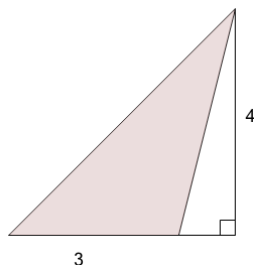
Find the area of the shaded triangle section



A	1.5	B	0
C	5	D	3
E	6	F	2

2

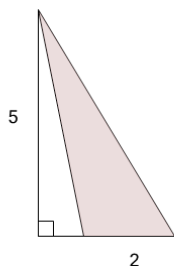
Find the area of the shaded triangle section



A	9	B	6
C	4.5	D	2
E	4	F	8

3

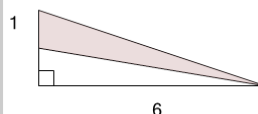
Find the area of the shaded triangle section



A	12.5	B	3.5
C	2.5	D	9
E	7.5	F	5

4

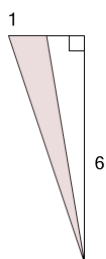
Find the area of the shaded triangle section



A	6	B	4.5
C	0	D	3
E	0.5	F	5

5

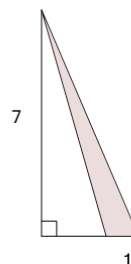
Find the area of the shaded triangle section



A	0	B	5
C	3.5	D	6
E	3	F	7

6

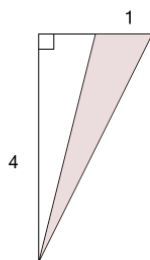
Find the area of the shaded triangle section



A	7	B	14
C	10.5	D	8
E	4	F	3.5

7

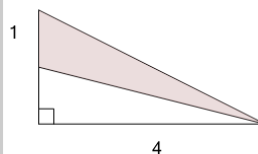
Find the area of the shaded triangle section



A	1	B	4
C	4.5	D	2
E	6	F	0.5

8

Find the area of the shaded triangle section



A	0.5	B	2
C	3	D	0
E	3.5	F	4