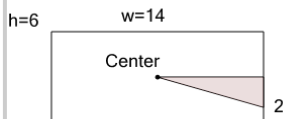




Area of a Right Triangle - Center of Rectangle (from Dimensions)

1

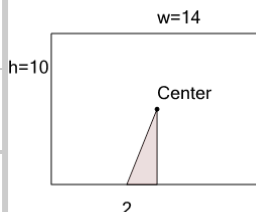
Find the area of the shaded triangle section



A	7.5	B	14
C	7	D	42
E	4.5	F	6

2

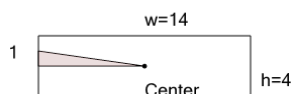
Find the area of the shaded triangle section



A	14	B	70
C	1.5	D	5
E	4.5	F	10

3

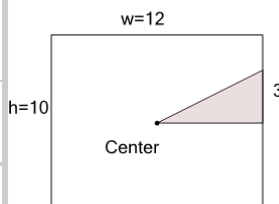
Find the area of the shaded triangle section



A	3.5	B	5
C	2	D	28
E	6	F	7

4

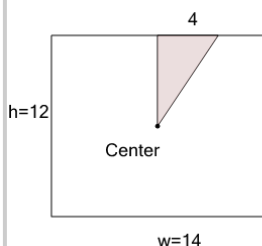
Find the area of the shaded triangle section



A	60	B	18
C	12.5	D	15
E	4	F	9

5

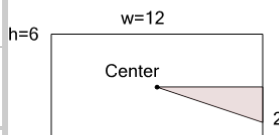
Find the area of the shaded triangle section



A	84	B	18
C	24	D	12
E	5	F	28

6

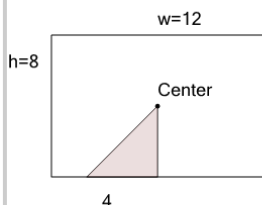
Find the area of the shaded triangle section



A	6.5	B	6
C	36	D	2.5
E	2	F	12

7

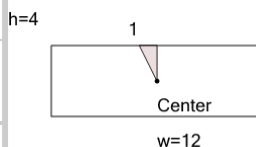
Find the area of the shaded triangle section



A	24	B	16
C	48	D	8
E	8.5	F	3

8

Find the area of the shaded triangle section



A	6	B	1
C	0.5	D	1.5
E	24	F	2