
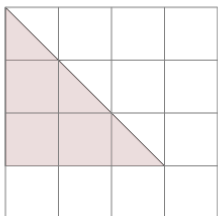




Area of a Right Triangle - On Grid - Image to Area

**1**

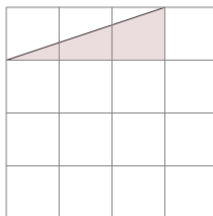
Find the area of the triangle on this grid of 1x1 squares



| | | | |
|---|-----|---|-----|
| A | 3.5 | B | 7.5 |
| C | 7 | D | 0.5 |
| E | 4.5 | F | 3 |

2

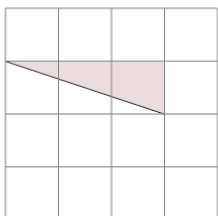
Find the area of the triangle on this grid of 1x1 squares



| | | | |
|---|-----|---|-----|
| A | 2.5 | B | 0.5 |
| C | 3 | D | 1.5 |
| E | 6 | F | 5 |

3

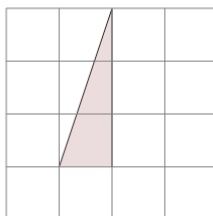
Find the area of the triangle on this grid of 1x1 squares



| | | | |
|---|-----|---|-----|
| A | 2.5 | B | 1.5 |
| C | 3.5 | D | 5 |
| E | 3 | F | 1 |

4

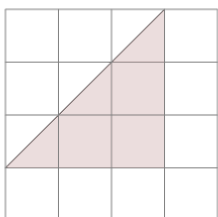
Find the area of the triangle on this grid of 1x1 squares



| | | | |
|---|-----|---|---|
| A | 3 | B | 2 |
| C | 1.5 | D | 4 |
| E | 4.5 | F | 5 |

5

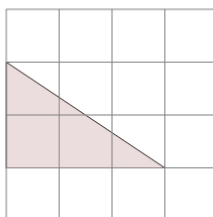
Find the area of the triangle on this grid of 1x1 squares



| | | | |
|---|-----|---|-----|
| A | 8 | B | 9 |
| C | 4.5 | D | 8.5 |
| E | 7.5 | F | 7 |

6

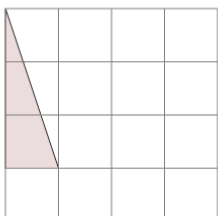
Find the area of the triangle on this grid of 1x1 squares



| | | | |
|---|-----|---|-----|
| A | 6 | B | 3 |
| C | 4 | D | 1 |
| E | 4.5 | F | 0.5 |

7

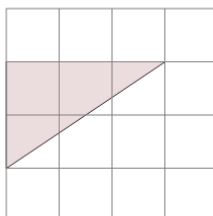
Find the area of the triangle on this grid of 1x1 squares



| | | | |
|---|-----|---|-----|
| A | 1.5 | B | 5 |
| C | 6 | D | 2.5 |
| E | 1 | F | 0.5 |

8

Find the area of the triangle on this grid of 1x1 squares



| | | | |
|---|-----|---|-----|
| A | 3 | B | 2 |
| C | 0.5 | D | 6.5 |
| E | 1.5 | F | 3.5 |