
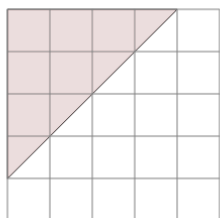


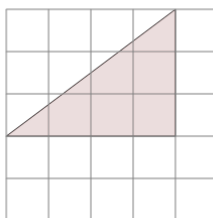


## Area of a Right Triangle - On Grid - Image to Area

**1**

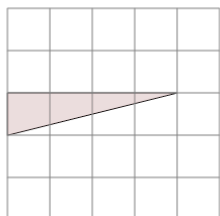
Find the area of the triangle on this grid of 1x1 squares

A	9	B	7
C	8	D	6.5
E	9.5	F	3

**2**

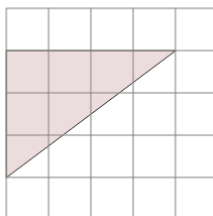
Find the area of the triangle on this grid of 1x1 squares

A	10.5	B	6
C	2.5	D	9
E	3	F	4

**3**

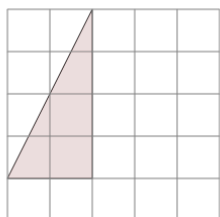
Find the area of the triangle on this grid of 1x1 squares

A	2	B	1
C	3	D	2.5
E	0.5	F	1.5

**4**

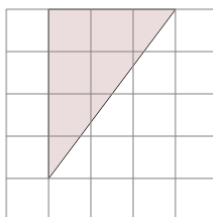
Find the area of the triangle on this grid of 1x1 squares

A	1	B	6
C	10	D	2.5
E	1.5	F	4.5

**5**

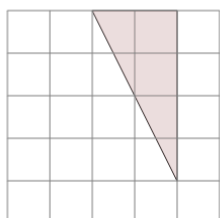
Find the area of the triangle on this grid of 1x1 squares

A	4	B	7
C	6	D	0.5
E	2	F	8.5

**6**

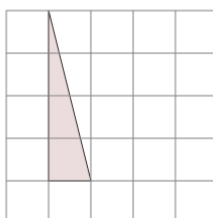
Find the area of the triangle on this grid of 1x1 squares

A	3.5	B	6
C	1.5	D	10
E	7.5	F	1

**7**

Find the area of the triangle on this grid of 1x1 squares

A	5.5	B	8
C	4	D	2.5
E	6	F	1

**8**

Find the area of the triangle on this grid of 1x1 squares

A	6	B	2.5
C	1	D	2
E	0.5	F	3