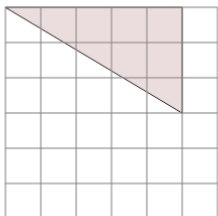




Area of a Right Triangle - On Grid - Image to Area

**1**

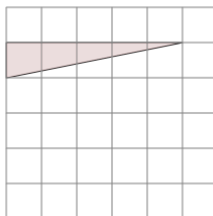
Find the area of the triangle on this grid of 1x1 squares



A	7	B	11
C	7.5	D	8.5
E	5	F	11.5

2

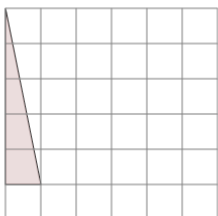
Find the area of the triangle on this grid of 1x1 squares



A	2	B	4.5
C	1	D	0.5
E	2.5	F	6

3

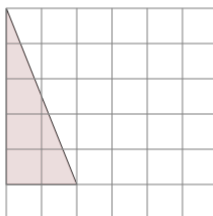
Find the area of the triangle on this grid of 1x1 squares



A	1.5	B	3.5
C	2.5	D	6.5
E	0.5	F	1

4

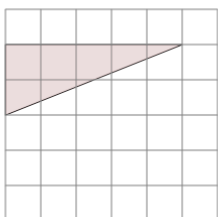
Find the area of the triangle on this grid of 1x1 squares



A	9	B	7.5
C	5	D	1.5
E	6	F	6.5

5

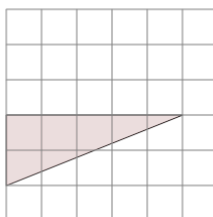
Find the area of the triangle on this grid of 1x1 squares



A	5.5	B	3.5
C	5	D	4.5
E	7	F	1

6

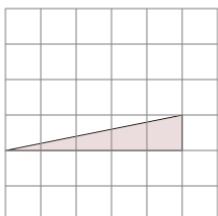
Find the area of the triangle on this grid of 1x1 squares



A	5	B	1.5
C	0.5	D	7
E	6.5	F	8

7

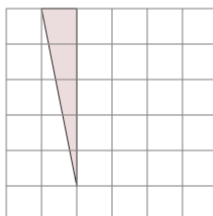
Find the area of the triangle on this grid of 1x1 squares



A	1.5	B	0.5
C	2	D	1
E	4	F	2.5

8

Find the area of the triangle on this grid of 1x1 squares



A	4	B	2.5
C	0.5	D	1.5
E	5	F	6