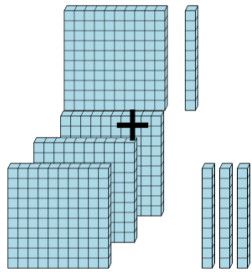




## Base 10 Blocks - Adding - Picture to Answer, No Carry - Hundreds and Tens

**1**

How many blocks are there?



A

5

B

0

C

80

D

440

E

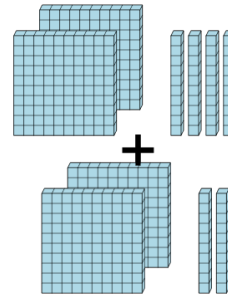
120

F

158

**2**

How many blocks are there?



A

191

B

45

C

520

D

460

E

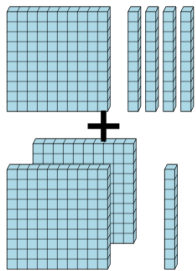
1520

F

2040

**3**

How many blocks are there?



A

110

B

140

C

70

D

10

E

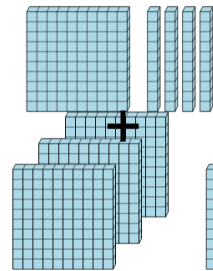
4730

F

350

**4**

How many blocks are there?



A

260

B

3720

C

90

D

830

E

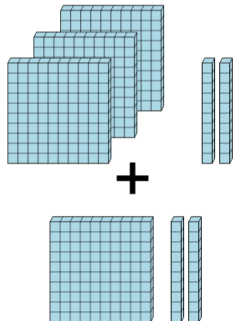
450

F

80

**5**

How many blocks are there?



A

366

B

1188

C

320

D

42

E

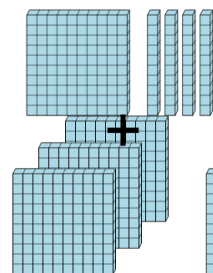
440

F

290

**6**

How many blocks are there?



A

420

B

450

C

200

D

70

E

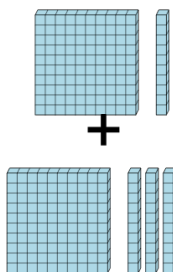
6

F

160

**7**

How many blocks are there?



A

2330

B

240

C

230

D

180

E

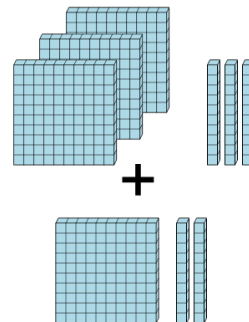
118

F

700

**8**

How many blocks are there?



A

290

B

110

C

450

D

280

E

5180

F

3850