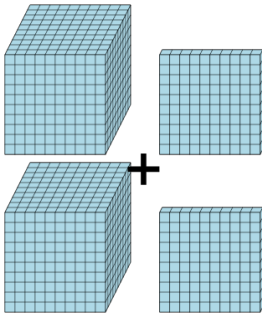
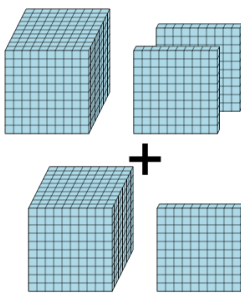
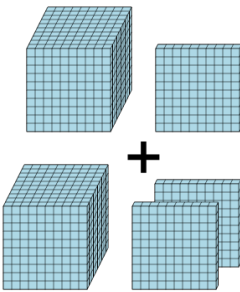
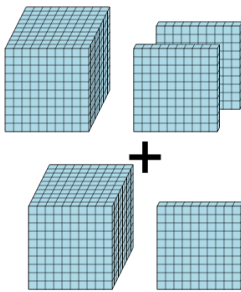
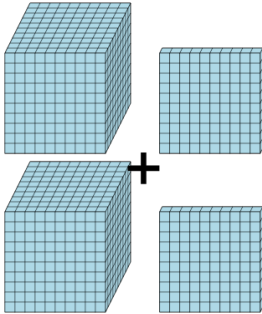
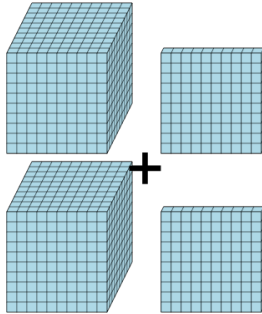
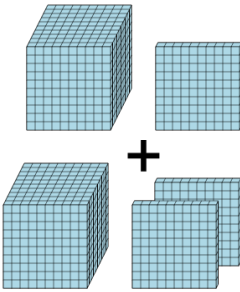
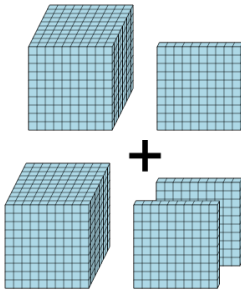




## Base 10 Blocks - Adding - Picture to Answer, No Carry - Thousands and

### Hundreds

<b>1</b> How many blocks are there? 	A 1328	B 100	C 2200
	D 2810	E 1697	F 2700
<b>2</b> How many blocks are there? 	A 1100	B 2300	C 1800
	D 2430	E 1200	F 1201
<b>3</b> How many blocks are there? 	A 3900	B 320	C 2300
	D 2098	E 1900	F 200
<b>4</b> How many blocks are there? 	A 1420	B 3100	C 1900
	D 2300	E 2100	F 300
<b>5</b> How many blocks are there? 	A 3000	B 102	C 1900
	D 2200	E 1000	F 1002
<b>6</b> How many blocks are there? 	A 1700	B 1900	C 2260
	D 2200	E 1699	F 1200
<b>7</b> How many blocks are there? 	A 200	B 800	C 2300
	D 3604	E 1800	F 100
<b>8</b> How many blocks are there? 	A 2600	B 1310	C 2300
	D 3100	E 1796	F 800