
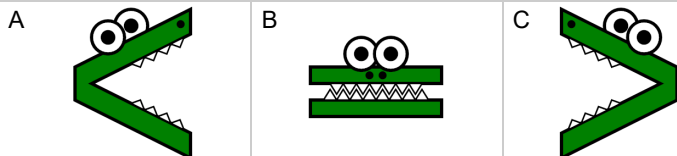





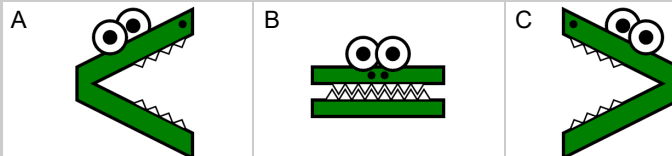

## Base 10 Blocks - Less or Greater Than - Pictures to Alligator - Hundreds and Tens



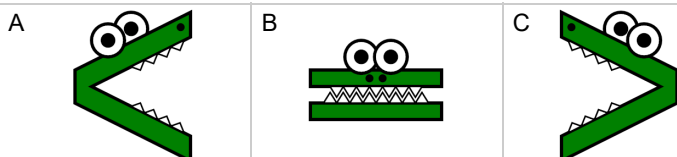
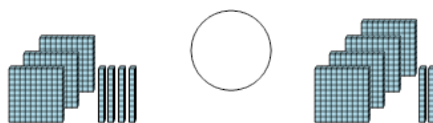
**1** Which way would the alligator face to eat the largest set of blocks?



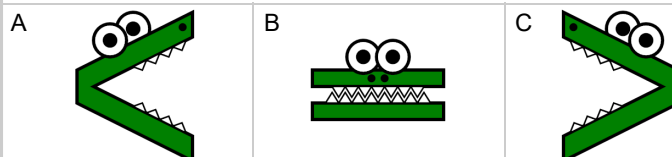

**2** Which way would the alligator face to eat the largest set of blocks?



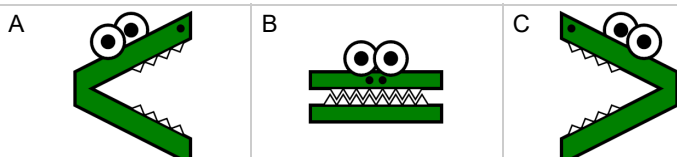
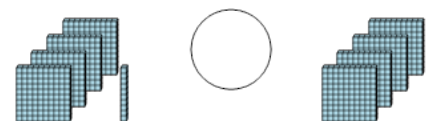
**3** Which way would the alligator face to eat the largest set of blocks?



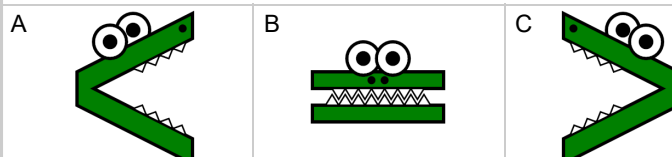

**4** Which way would the alligator face to eat the largest set of blocks?



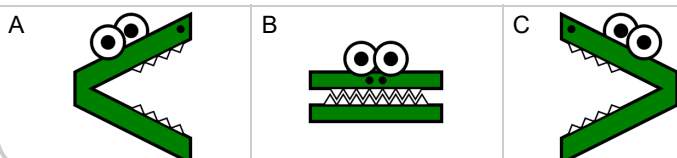

**5** Which way would the alligator face to eat the largest set of blocks?



**6** Which way would the alligator face to eat the largest set of blocks?



**7** Which way would the alligator face to eat the largest set of blocks?



**8** Which way would the alligator face to eat the largest set of blocks?

