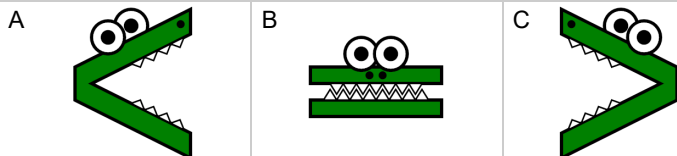




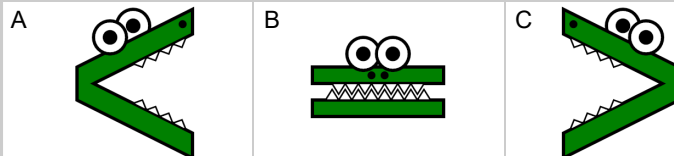
Base 10 Blocks - Less or Greater Than - Pictures to Alligator - Ones



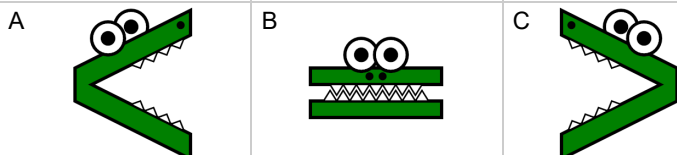
1 Which way would the alligator face to eat the largest set of blocks?



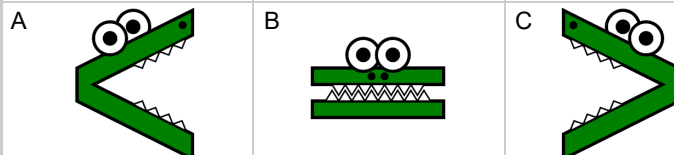
2 Which way would the alligator face to eat the largest set of blocks?



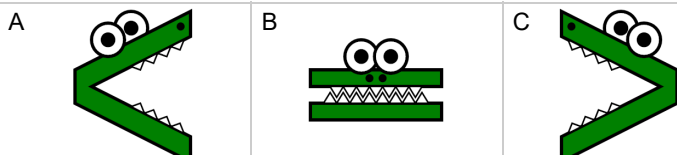
3 Which way would the alligator face to eat the largest set of blocks?



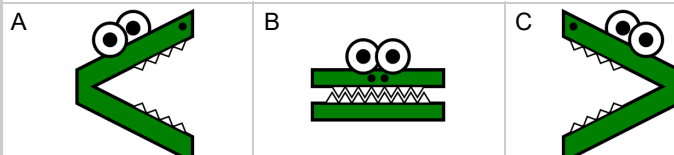
4 Which way would the alligator face to eat the largest set of blocks?



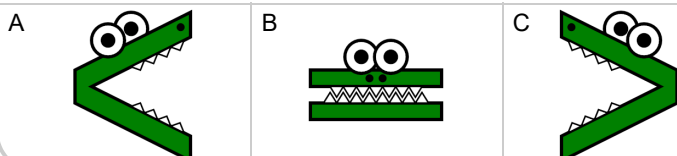
5 Which way would the alligator face to eat the largest set of blocks?



6 Which way would the alligator face to eat the largest set of blocks?



7 Which way would the alligator face to eat the largest set of blocks?



8 Which way would the alligator face to eat the largest set of blocks?

