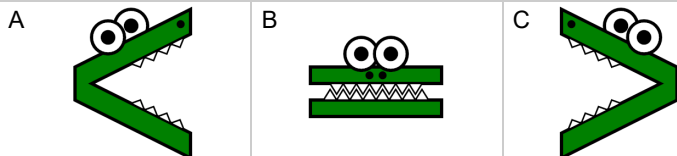






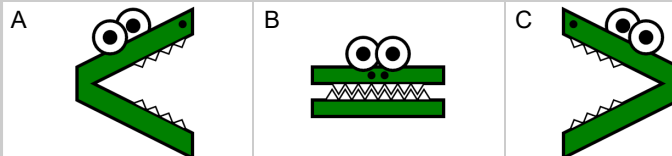
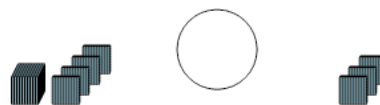
Base 10 Blocks - Less or Greater Than - Pictures to Alligator - Thousands and

Hundreds

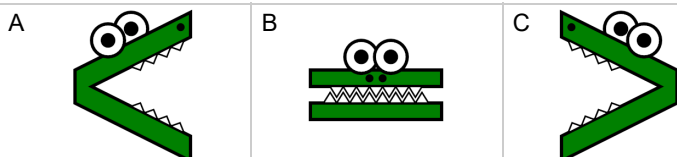
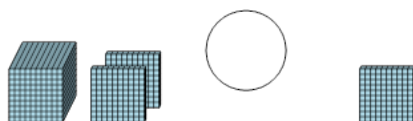
1 Which way would the alligator face to eat the largest set of blocks?



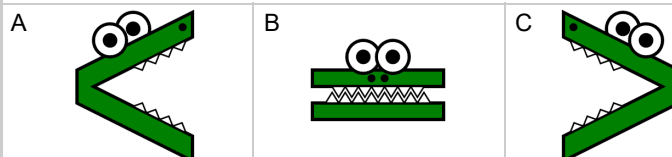
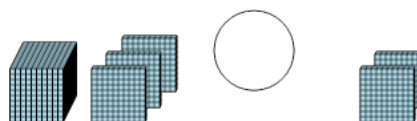
2 Which way would the alligator face to eat the largest set of blocks?



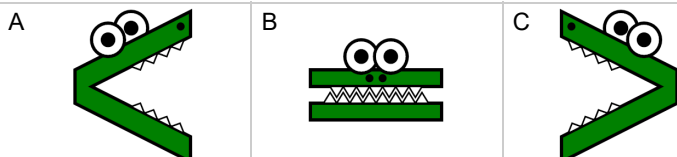
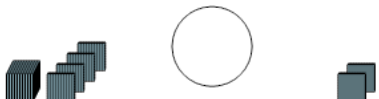
3 Which way would the alligator face to eat the largest set of blocks?



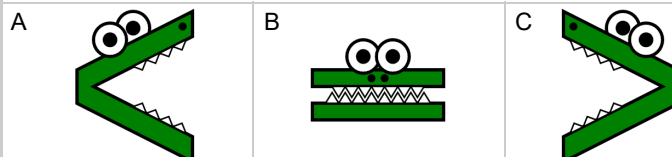
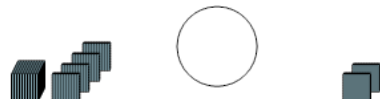
4 Which way would the alligator face to eat the largest set of blocks?



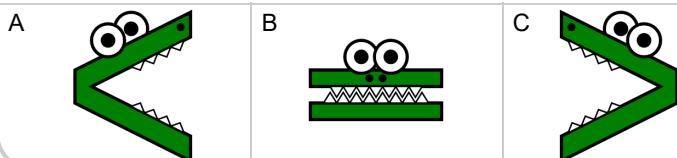
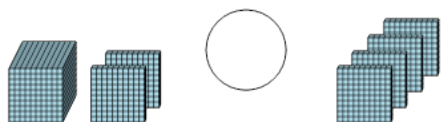
5 Which way would the alligator face to eat the largest set of blocks?



6 Which way would the alligator face to eat the largest set of blocks?



7 Which way would the alligator face to eat the largest set of blocks?



8 Which way would the alligator face to eat the largest set of blocks?

