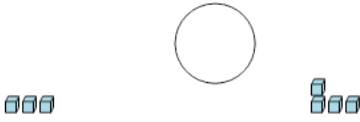




## Base 10 Blocks - Less or Greater Than - Pictures to Symbol - Ones



**1** Is the first set less than, greater than,  
or equal to the second set?



A

&lt;

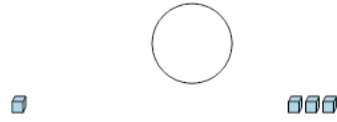
B

=

C

&gt;

**2** Is the first set less than, greater than,  
or equal to the second set?



A

&lt;

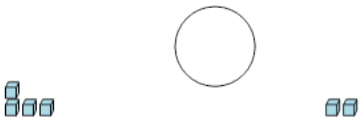
B

=

C

&gt;

**3** Is the first set less than, greater than,  
or equal to the second set?



A

&lt;

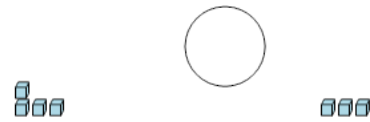
B

=

C

&gt;

**4** Is the first set less than, greater than,  
or equal to the second set?



A

&lt;

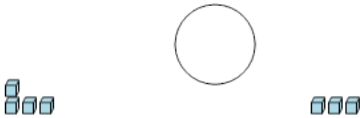
B

=

C

&gt;

**5** Is the first set less than, greater than,  
or equal to the second set?



A

&lt;

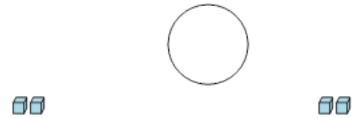
B

=

C

&gt;

**6** Is the first set less than, greater than,  
or equal to the second set?



A

&lt;

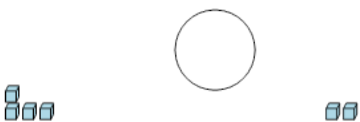
B

=

C

&gt;

**7** Is the first set less than, greater than,  
or equal to the second set?



A

&lt;

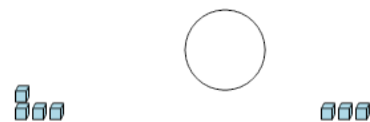
B

=

C

&gt;

**8** Is the first set less than, greater than,  
or equal to the second set?



A

&lt;

B

=

C

&gt;