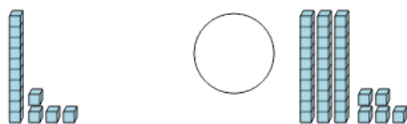


Base 10 Blocks - Less or Greater Than - Pictures to Symbol - Tens and Ones

1 Is the first set less than, greater than,
or equal to the second set?



A

<

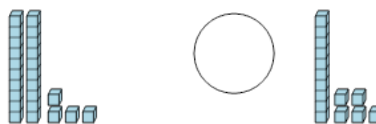
B

=

C

>

2 Is the first set less than, greater than,
or equal to the second set?



A

<

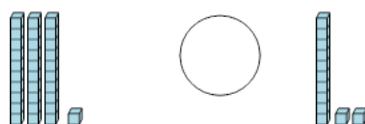
B

=

C

>

3 Is the first set less than, greater than,
or equal to the second set?



A

<

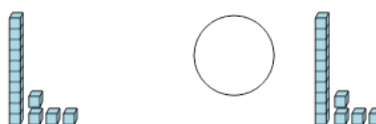
B

=

C

>

4 Is the first set less than, greater than,
or equal to the second set?



A

<

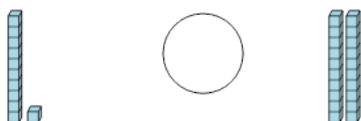
B

=

C

>

5 Is the first set less than, greater than,
or equal to the second set?



A

<

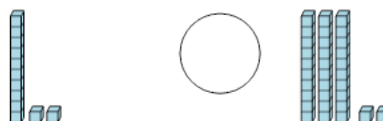
B

=

C

>

6 Is the first set less than, greater than,
or equal to the second set?



A

<

B

=

C

>

7 Is the first set less than, greater than,
or equal to the second set?



A

<

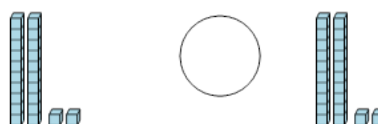
B

=

C

>

8 Is the first set less than, greater than,
or equal to the second set?



A

<

B

=

C

>