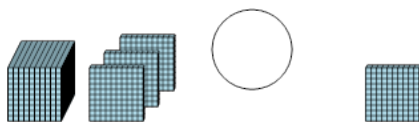




Base 10 Blocks - Less or Greater Than - Pictures to Symbol - Thousands and

Hundreds

1 Is the first set less than, greater than, or equal to the second set?



A

B

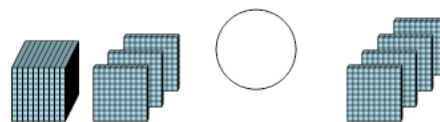
C

<

=

>

2 Is the first set less than, greater than, or equal to the second set?



A

B

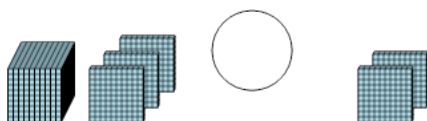
C

<

=

>

3 Is the first set less than, greater than, or equal to the second set?



A

B

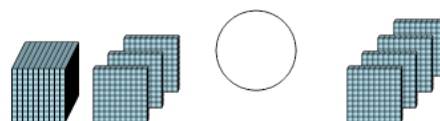
C

<

=

>

4 Is the first set less than, greater than, or equal to the second set?



A

B

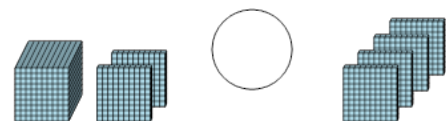
C

<

=

>

5 Is the first set less than, greater than, or equal to the second set?



A

B

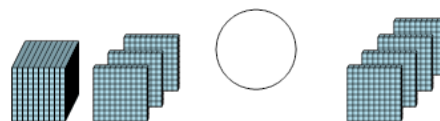
C

<

=

>

6 Is the first set less than, greater than, or equal to the second set?



A

B

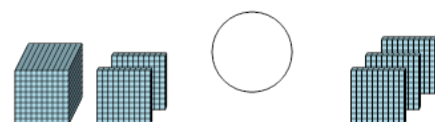
C

<

=

>

7 Is the first set less than, greater than, or equal to the second set?



A

B

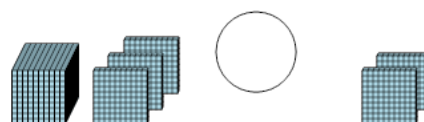
C

<

=

>

8 Is the first set less than, greater than, or equal to the second set?



A

B

C

<

=

>