



Base 10 Blocks - Less or Greater Than - Pictures to Words - Hundreds and Tens

1 Is the first set less than, greater than,
or equal to the second set?



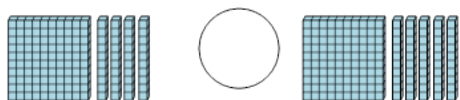
A	less	B	equals
C	greater		

2 Is the first set less than, greater than,
or equal to the second set?



A	less	B	equals
C	greater		

3 Is the first set less than, greater than,
or equal to the second set?




A	less	B	equals
C	greater		

4 Is the first set less than, greater than,
or equal to the second set?




A	less	B	equals
C	greater		

5 Is the first set less than, greater than,
or equal to the second set?



A	less	B	equals
C	greater		

6 Is the first set less than, greater than,
or equal to the second set?



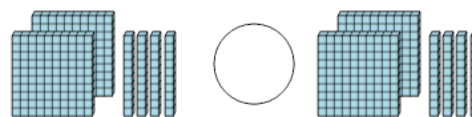
A	less	B	equals
C	greater		

7 Is the first set less than, greater than,
or equal to the second set?



A	less	B	equals
C	greater		

8 Is the first set less than, greater than,
or equal to the second set?



A	less	B	equals
C	greater		